

NANUKU SANGAM SCHOOL
NEW TERM RE-ALIGNED
WORKSHEET 15- 2021

NAME: _____

YEAR / LEVEL: 4

SUBJECT: ENGLISH

SECTION A

CONTRACTIONS

Write the words that each contraction stands for.

1. Don't - Do not 2. Isn't - _____ 3. I'm - _____
4. She'll - _____ 5. You're - _____ 6. He's - _____

SECTION B

PREPOSITIONS OF TIME

Use **in**, **at** and **on** in the blank spaces.

1. in the evening. 2. _____ Wednesday. 3. _____ the year 1984.
4. _____ 8 o'clock. 5. _____ Friday afternoon. 6. _____ night.

SECTION C

PLURAL NOUNS

Write the plural form of the following nouns.

1. library – libraries 2. bird - _____ 3. person - _____
4. child - _____ 5. knife - _____ 6. tooth - _____

SECTION D

NOUNS

Complete the sentences using the correct nouns from the list.

1. Put your books in the bag.
2. The _____ should not be in the kitchen.
3. Wash your _____ before dinner.
4. He loves to play with his _____.
5. My birthday is on _____ this year.
6. Mere lives in _____.

Saturday
dog
hands
bag
Lautoka
bicycle

NANUKU SANGAM SCHOOL
NEW TERM RE-ALIGNED
WORKSHEET 15- 2021

SUBJECT: MATHEMATICS

YEAR: 4

NAME: _____

Circle the correct answer.

1. What is the value of the underlined digit? **7 8 4 1**

A. Ones

B Tens

C. Hundreds

D. Thousands

2. Find the product of $42 \times 5 =$ _____

A. 210

B. 200

C. 250

D. 100

3. $435 + 291 =$ _____

A. 536

B. 720

C. 726

D. 534

4. Mr. Joseph sold 2 dozen eggs. How many eggs did he sell?

A. 20

B. 12

C. 24

D. 14

5. Name a shape that has 5 sides. _____

A. Pentagon

B. Circle

C. Trapezium

D. Square

6. If the time is 7.30 a.m, what will be the time 15 minutes later?

A. 7.45 a.m.

B. 6.45 a.m.

C. 7.15 a.m.

D. 8.00 a.m.

7. A village loaded a total of 140 logs equally in ten trucks. How many logs did each truck load to deliver to the timber yard?

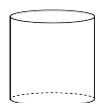
A. 10

B. 14

C. 120

D. 150

8. Name the given shape.



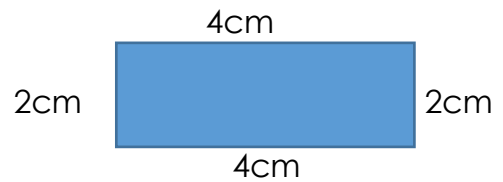
A. Cone

B. Sphere

C. Cylinder

D. Cube

9. What is the perimeter of the shape given below?



- A. 12 cm B. 8 cm C. 10 cm D. 6 cm

10. A quarter to eight when written in digital would be?

- A. 7.00 B. 7.30 C. 7.45 D. 8.00

11. Complete the pattern given: {3, _____, _____, 15, 19}

- A. 7, 11 B. 6, 10 C. 6, 9 D. 7, 14


SECTION B

WRITE TRUE OR FALSE

1. A parallelogram has 2 parallel sides. True
2. A square has 4 equal sides. _____
3. 100 centimetres is equal to 1 metre. _____
4. The main unit for measuring volume is called Litre. _____
5. There are altogether 15 months in a year. _____
6. Half past 6 in the morning is written as 6:30 pm. _____

SECTION C

SHORT ANSWERS

Questions	Working & Answer
1. Jone planted 243 cabbages on Monday and 126 cabbages on Tuesday. How many cabbages did he planted altogether?	$ \begin{array}{r} 243 \\ + 126 \\ \hline 369 \end{array} $
2. Priya baked a cake and divided it into 6 equal pieces. She gave 2 pieces to Mere. What fraction of the cake is left with Priya?	
3. Find the area of the shape given below. 	
4. Adi has one litre bottle of juice. She drank 500ml. How much juice is left in the bottle?	

5. Add the following:

$$\$1.20 + \$ 4.00 + \$2.80 = \underline{\hspace{2cm}}$$

6. Draw a triangular prism.

SANGAM EDUCATION BOARD- ONLINE RESOURCES

NANUKU SANGAM SCHOOL
NEW TERM RE-ALIGNED
WORKSHEET 15- 2021

NAME: _____

YEAR / LEVEL: 4

SUBJECT: I-TAUKEI

TOTAL MARKS: 20

WASEWASE A : NA VEIKA VAKAVITI (5 na maka)

WIRINA NA A, B SE C ME NOMU ISAU NI TARO.

1. Na vosa cava e sucu mai e na vosa oqo : " levu "
 - A. lailai
 - B. vakalevu
 - C. lewe levu
2. Na cava na veibasai ni vosa oqo : " vesuka "
 - A. sereka
 - B. dula
 - C. vakatotolo
3. Na ganei tinaqu e noqu
 - A. Nei
 - B. Momo
 - C. Tutu
4. Ni ko kauta tani na kuli ni jaina, ko na :
 - A. varia
 - B. civita
 - C. vocia
5. Na vusi e dau
 - A. gau
 - B. kodro
 - C. soki

WASEWASE B : IO SE SEGA (5 na maka)

1. Ni tini na niu sa dua na iqali. _____
2. Ni ko lai kauta mai na ika ko na betia. _____
3. Na mataisau sa ira na dau sivisivi. _____
4. Ni ko liga bula e na tukauni ni ko tamata dau tali ibe. _____
5. Ko ira na bati e nodra itavi na taqomaka na turaga. _____

WASEWASE C: VEISATAKA NA VOSA E VEIBASAI (5 na maka) (VOLA NA MATANIVOLA E LOMA NI

A	SAU NI TARO	B
1. cecere		a. osooso
2. marau		b. sogota
3. galala		c. vinakata
4. dolava		d. lolovira
5. cata		e. rarawa

WASEWASE D: VAKALEWENA YAVU NI VOSA (5 na maka)

VOSA	YAVU	VOSA SUCU
1. vakabula		bulabula
2. vakayadra		yadrava
3. vakamoce		veimoceri
4. vakasuka		veivakasukai
5. vakavale		veivalevale

**2034 NANUKU SANGAM SCHOOL
NEW TERM RE - ALIGNED
WORKSHEET 15-2021**

Subject: Healthy Living

Year: 4

Name: _____

Strand	Personal and Community Health
Sub-Strand	People and Food
Content Learning Outcome (CLO)	Identify food sources

People and Food

We get food from different sources; for example:

1. Butcher - meat



2. Garden – vegetables




2. Bakery – bread, bun, pastries



3. Supermarket - grocery



3. Sea – fish, crab, lobster



Activity:

Name the food source for the following.

1. crab	
2. vegetables	
3. bread	
4. meat	
5. tin-fish, rice, sugar	

Drawing

Draw and colour **five** sea creatures.



2034 NANUKU SANGAM SCHOOL
NEW TERM RE - ALIGNED
WORKSHEET 15-2021

Subject: Hindi

Year: 4

Name: _____

Strand	लिखना एवं निर्माण करना
Sub Strand	भाषा की विशेषताएँ एवं नियम
Content Learning Outcome	मूल-पाठ के प्रकार-मीडियासाधारण संप्रेषण साहित्यिक विषय

Lesson Notes:

जब आप कोई कार्य करते हो और जब उस कार्य के होने के समय (time) का पता चले उसे Tense कहते हैं। उदाहरण के तोर पर समझे तो किसी भी कार्य को आपने कब करा, किस समय किया और उस कार्य को किस समय करने वाले हैं? जिस काम में समय (Time) आ जाये वो टेंस कहलाता है।

TENSE (काल) – पहचान			
	PRESENT (है, हैं, हो, हूँ)	PAST (था, थे, थी)	FUTURE (गा, गे, गी)
Indefinite	ता, ते, ती Does / Do	{आया} / {ता ते ती} Did (Non Action Verbs)	गा, गे, गी Will
Continuous	रहा, रही, रहे + हैं Is / Am / Are + V4	रहा, रही, रहे + था Was / Were + V4	रहा, रही, रहे + होगा Will be + V4
Perfect	चुका, लिया, ली + है Has / Have + V3	चुका, लिया, ली + था Had + V3	चुका, लिया, ली + होगा Will have + V3
Perfect Continuous	रहा, रही, रहे + हैं समय के साथ 'से' के लिए Since/For Has/Have+been+V4	रहा, रही, रहे + था समय के साथ 'से' के लिए Since/For Had been + V4	रहा, रही, रहे + होगा समय के साथ 'से' के लिए Since/For/From Will have been + V4

 **पढ़ो और अधूरे वाक्य सही शब्द लिखकर पूरे करो।**

मैं खेल रहा ।	हैं
राधा नाचती ।	है
हम गाना गाते ।	हूँ
मैं पत्र लिखती ।	
पिता जी ।	आई
माता जी ।	आई
मेरी सहेली ।	आए
विपिन मेरे घर ।	
दादा जी अंदर ।	आया
लड़के इधर ।	आए
धोबी कल था।	

**2034 NANUKU SANGAM SCHOOL
NEW TERM RE - ALIGNED
WORKSHEET 15 -2021**

Subject: Social Science

Year: 4

Name: _____

STRAND:	Resources And Economic Activities
SUB STRAND:	People and Work
CONTENT LEARNING OUTCOME:	Gather information on services that are available in their communities and compare the different roles they play in helping people.

LESSON NOTES:

People who help us

- Farmers help us by giving us food such as; fruits, vegetables, root crops and sugarcane.
- Policemen help us by crossing the road and helping us when we are in trouble.
- Doctors help us by giving medication when we are sick.
- Teachers help us by teaching us how to read and write.

Activity

Write down how the following people help others in your neighbourhood.

1. Shopkeeper - _____
2. Policeman - _____
3. Doctor - _____
4. Farmer - _____
5. Teacher - _____

Give two reasons why these people are important for your community.

- a. _____
- b. _____

Draw and colour



Policeman



Nurse



Teacher

**2034 NANUKU SANGAM SCHOOL
NEW TERM RE - ALIGNED
WORKSHEET 15 -2021**

Subject: Elementary Science

Year: 4

Name: _____

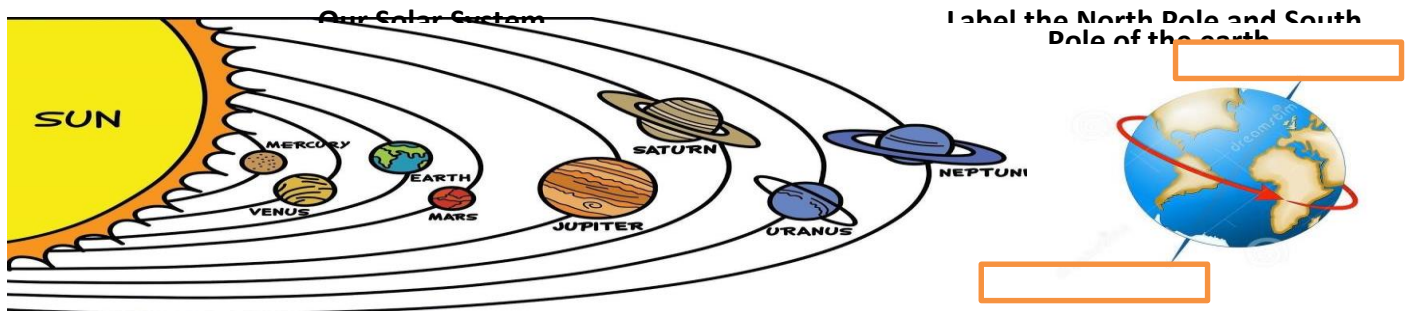
STRAND:	Earth And Beyond
SUB STRAND:	Our Solar System
CONTENT LEARNING OUTCOME:	Investigate, gather and display information that illustrates the earth is part of the system of planets that revolve around the sun.

LESSON NOTES:

Our Solar System

What is the solar system?

- It is our sun and everything that travels around it. Our solar system is **elliptical** [oval] in shape.
- The **sun** is in the **centre** of the solar system.
- **Eight planets** have been discovered in our solar system.
- The sun is the biggest object in the solar system.
- **Astronomers** are people who study the outer space and stars. **Earth's Movement**
- The Earth spins on imaginary pole called the **earth's axis**.
- Top end of the earth's axis is called the **North Pole** and the bottom end is called the **South Pole**. □ People cannot feel the earth turn because it is so big.
- **In the morning**, earth is turned **towards** the sun but **at night** the earth is turned **away** from the sun.



Activity: Fill in the blanks

axis South North away big Astronomers

1. We cannot feel the earth turn because it is so _____.
2. The sun is turned _____ from us at night.
3. The imaginary pole going through the centre of the earth is called its _____.
4. The top end of the earth is the _____ pole and the bottom end is the _____ pole.
5. People who study the outer space and stars are called _____.

