

WEEKLY HOMESTUDY

PACKAGE # 13

ASSESSMENT

YEAR 4

ASSESSMENT INSTRUCTIONS FOR PARENTS

- Follow the time allocated strictly. (ie. 30 minutes for each paper.)
- It should be done by the child without any assistance provided by parents or siblings.
- Child should not get access to the paper before the test.
- The picture of child's work should be sent to the teacher immediately after finishing the paper.
- Follow the timetable given below:

<u>Monday</u>	<u>Tuesday</u>	<u>Wednesday</u>	<u>Thursday</u>
Maths	Elementary Science	Health Science	Catch up session
English	Vernacular	Social Studies	

- ❖ **Test can be conducted at any time of the allocated day.**
- ❖ **If students are not able to sit for the test on the scheduled day they'll do it during catch up session.**
- ❖ **Please inform the teacher if the child is unable to sit for the test on that particular day.**

Be honest with the assessment to get the true picture of your child's learning.

1076 NADISANGAM SCHOOL

ENGLISH ASSESSMENT - SEPTEMBER

YEAR: 4

MARKS: 20

A. CONFUSING PAIRS (5 MARKS)

1. This is a big _____. (tin, teen)
2. The _____ shines during the day. (son, sun)
3. I like to _____ fish and dalo. (it, eat)
4. They ate _____ own food. (their, there)
5. Premila is a _____. (woman, women)

SECTION B OPPOSITES (5 MARKS)

- | | |
|------------------|------------------|
| 1. dark - _____ | 4. first - _____ |
| 2. cold - _____ | 5. night - _____ |
| 3. after - _____ | |

SECTION C PAST TENSE (5 MARKS)

- | | | |
|----------|---|-------|
| 1. call | - | _____ |
| 2. sing | - | _____ |
| 3. blow | - | _____ |
| 4. take | - | _____ |
| 5. enjoy | - | _____ |

SECTION D REPORTED SPEECH (5 MARKS)

1. "My name is Ruby," said the girl.

2. "I am running," said the boy.

3. "I am going to town," said mother.

4. "It is very hot," said Rahil.

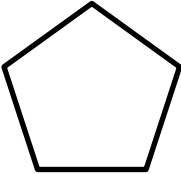
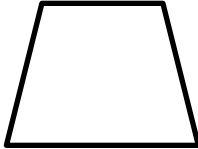
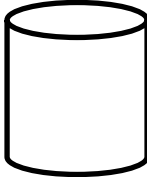
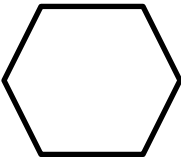
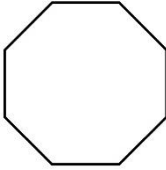
5. "Who broke the glass?" asked the teacher.

1076 NADI SANGAM SCHOOL
YEAR 4 MATHEMATICS SEPTEMBER ASSESSMENT 2021

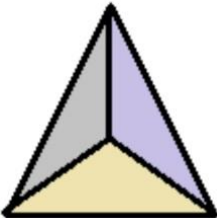
Section A: Multiple Choice (Circle the best answer)

1. Which is a two-dimensional shape
A. cylinder B. cube C. square
2. How many faces are there in a triangular pyramid?
A. 4 B. 5 C. 6
3. What do we call a shape with ten sides?
A. decagon B. nonagon C. octagon
4. What type of triangle has all unequal sides?
A. isosceles B. scalene C. equilateral
5. How many lines of symmetry are there in a rectangle?
A. 1 B. 2 C. 3

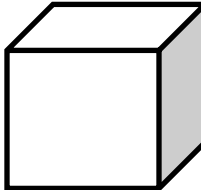
Section B: Label the shapes given below

 a. _____	 b. _____	 c. _____
 d. _____	 e. _____	

Section C: Fill in the Blanks

1. 

a. Total edges = _____
b. Total vertices = _____

2. 

a. Total faces: _____
a. Total vertices: _____
b. Total edges: _____

1076 NADI SANGAM SCHOOL
YEAR 4 EL. SCIENCE SEPTEMBER ASSESSMENT 2021

Section A: Matching

- | | | |
|-----------------|-------|---------------------------|
| 1. Gravity | _____ | A. measured by rain gauge |
| 2. Habitat | _____ | B. wise use of resources |
| 3. Wind mill | _____ | C. generates electricity |
| 4. Conservation | _____ | D. organism's home |
| 5. Rainfall | _____ | E. earth's pull |

Section B: True or False

1. Ocean waves can generate power - _____
2. Weather is the day to day condition of a place - _____
3. Warm and wet season in Fiji is from Nov. to April - _____
4. Sun's heat evaporate dust - _____
5. Planet Saturn has no ring around it - _____

1076 NADISANGAM SCHOOL
YEAR 4 HEALTH SCIENCE ASSESSMENT

Marks: 20

Section A

Matching

- | | | |
|--------------|-------|------------------------|
| 1. Typhoid | _____ | A. Household pest |
| 2. Small pox | _____ | B. Water borne disease |
| 3. Spring | _____ | C. Air borne disease. |
| 4. Prawns | _____ | D. Water source |
| 5. Fly | _____ | E. Sea resource |

Section B

Write True or False

1. We get groceries from butcher. _____
2. Good hygiene refers to healthy habits. _____
3. Fresh air fights disease germs. _____
4. Overcrowded rooms control air borne diseases. _____
5. Cholera is an air borne disease. _____

Section C

Short answers

1. What is conservation?

2. List 2 things that forest provides.

3. Name 2 air borne diseases.

4. Name two water borne diseases.

5. List 2 road safety rules.

1076 NADISANGAM SCHOOL
YEAR 4 HEALTH SCIENCE ASSESSMENT

Marks: 20

Section A

Matching

- | | |
|-------------------|--|
| 1. Weather _____ | A. measured by solarimeter. |
| 2. Forest _____ | B. one of the important things used for drinking, cooking. |
| 3. Clouds _____ | C. day to day conditions of a place. |
| 4. Sunshine _____ | D. A large area of trees. |
| 5. Water _____ | E. tiny water droplets |

Section B

Write true and false

- | | |
|---|-------|
| 1. Barometer measures air pressure. | _____ |
| 2. Conservation means saving the resources. | _____ |
| 3. We should always throw rubbish in the sea, river, and streams. | _____ |
| 4. We should always waste water. | _____ |
| 5. A thermometer is used to measure temperature. | _____ |

Section C

Short answers

1. State one way how you save energy at home?

2. Name the person who studies weather.

3. The amount of water vapor present in the atmosphere is called _____.
4. Define the word precipitation.

5. Write down two ways in which you can save water at home.

भाषा अभ्यास

A. कोष्ठक में दिए गए शब्दों में से सही शब्द चुनकर वाक्यों को पूरा करो।

1. क्या आपने ----- पुस्तक देखी है? (मेरा/ मेरी)
2. ----- भी कुछ देर के लिए बैठ जाएं। (तू/ आप)
3. ----- कपड़े मेरे हैं। (यह / ये)
4. क्या----- सुनाई नहीं देती? (तुम्हारे/ तुम्हें)
5. ----- आज शहर जाऊंगा। (आप/ मैं)

B. इन वाक्यों के खाली स्थानों को भरों।

1. मैंने एक चिट्ठी -----। (लिखा / लिखी)
2. कल खूब वर्षा -----। (हुआ / हुई)
3. वर्मा जी आए -----। (है / हो)
4. सांझ हो -----। (गया / गई)
5. दरवाजा खुल -----। (गया / गई)

C. कोष्ठक में दिए गए शब्दों के सही रूपों से रिक्त स्थानों को भरों।

जैसे : मैंने बिल्ली को **मारा**। (मारना)

1. मैंने कुत्ते को -----। (पकड़ना)
2. घी गिर -----। (पड़ना)
3. आसमान में तारे ----- रहे हैं। (चमकना)
4. राम घर पर काम ----- है। (करना)
5. मेरे घर एक मेहमान ----- हैं। (आना)

D. दिए गए शब्दों का विलोम शब्द लिखो।

1. न्याय - -----
2. सफेद - -----
3. होश - -----
4. आज - -----
5. अच्छा - -----

1076 NADI SANGAM SCHOOL
YEAR 4 SEPTEMBER ASSESSMENT 2021

LESONI: I TAUKEI

KALASI: _____ **YACAMU:** _____

A. Vakacuruma na vosa e ganita. Na vosa me nanumi. (Vola na vosa ka koto oqo na kenai balebale)

- a. basuka ka curu yani ki tautuba - _____
- b. na qele soso ka suasua vakalevu - _____
- c. na nodra vale se bai ni vuaka - _____
- d. na luve ni vuaka - _____
- e. na vosa tautauvata kei na cobacoba - _____

drolo	geti	bote	tekiteki	toro	cavucavu
-------	------	------	----------	------	----------

B. Vola nai vosavosa vaka-Viti ena veivanua dodonu.

- 1. Sa mate e dua na tamata - _____
- 2. Sa vakawati e dua na goneyalewa - _____
- 3. Ni lako e dua ka sega ni bau tatau - _____
- 4. E dua e dau tutu ga e vale ka seg ani cakava e dua na ka yaga -

- 5. Ni sa oca e dua ena cakacaka - _____

C. Vosa tautauvata

- a) Cobacoba - _____
- b) Tukuna - _____
- c) Taura - _____
- d) Marautaka - _____
- e) Magiti - _____

D. Vosa Veibasai

- a) Manoa - _____
- b) Ulumatua - _____
- c) Lila - _____
- d) Druka - _____
- e) Sorova - _____