

NADI SANGAM SCHOOL


WEEKLY HOME STUDY PACKAGE #16

FORMATIVE ASSESSMENT OCTOBER

SOLUTIONS

YEAR 5

25/10/21- 29/10/21



- I understand.
- I can do this by myself.
- I can show what I know.

NADI SANGAM SCHOOL

WHSP#16- FORMATIVE ASSESSMENT- OCTOBER 2021

YEAR 5

MATHEMATICS- SOLUTIONS

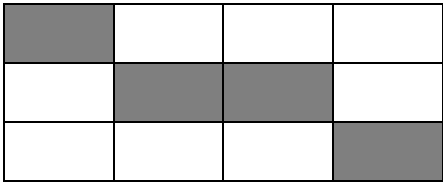
SECTION A: Choose the correct sign $<$, $>$ or $=$ for questions 1 – 5.

PROBLEM	WORKING	ANSWER
1. Half of 50 <input type="checkbox"/> 25		$=$
2. \$5.90+ \$0.07 <input type="checkbox"/> \$4.90+ \$1.05		$>$
3. 8 x 10 <input type="checkbox"/> 10 + 8		$>$
4. 230 + 10 <input type="checkbox"/> 225 + 5		$>$
5. 1.67+ 3.21 <input type="checkbox"/> 4.89		$<$

SECTION B: Write **True** or **False** for questions 6 – 10.

6. $10 \times 0.05 = 0.5$		True
7. Number Patterns is a list of numbers that follow a certain pattern or sequence.		True
8. $\{ 2, 45, 0.5, \frac{1}{2} \}$ The decimal number from the above set is 0.5		True

9. {1, 4, 7, 10, 13, ...} is a plus 4 pattern.		False
10. $0.7 \div 100 = 0.007$		True
SECTION C: Find the answers to the following		
11. $\begin{array}{r} 36.66 \\ + 45.76 \\ \hline \end{array}$		82.42
12. Identify the pattern and write the next four numbers. {2, 4, 6, 8, 10, 12, __, __, __, __, ...}		{2, 4, 6, 8, 10, 12, 14, 16, 18, 20 , ...} +2. This is +2 pattern
13. Use the rule $2n + 1$ to find the following element. 16^{th}		$2(16) + 1 = 33$
14. $\begin{array}{r} 3 \overline{)12.9} \end{array}$		$\begin{array}{r} 04.3 \\ 3 \overline{)12.9} \\ - 12.0 \\ \hline 00.9 \\ - 00.9 \\ \hline 00.0 \end{array}$
15. Write decimals for the following mixed number. $1 \frac{56}{100}$	$\begin{array}{r} 1.0 \\ + 0.56 \\ \hline 1.56 \end{array}$	1.56
Section D: Write the letter of the correct answer in the answer column		
16. $3.46 \times 100 =$ A. 3.46 B. 34.6 C. 0.346 D. 346		D
17. What is the next missing number in skip counting by 5's in ascending order? {15, ____, 25, 30, 35, 40}		C

<p>A. 10 C. 20</p> <p>B. 15 D. 25</p>		
<p>18.</p> $\frac{2}{8} + \frac{1}{8} =$ <p>A. $\frac{4}{5}$ C. $\frac{5}{10}$</p> <p>B. $\frac{3}{8}$ D. $\frac{4}{5}$</p>		B
<p>19. Multiply this:</p> $\begin{array}{r} 23 \\ \times 10 \\ \hline \end{array}$ <p>A. 230 C. 1023</p> <p>B. 2300 D. 564</p>		A
<p>20. What part of the shape is not shaded?</p>  <p>A. $\frac{1}{4}$ C. $\frac{2}{3}$</p> <p>B. $\frac{1}{3}$ D. $\frac{3}{4}$</p>		B

NADI SANGAM SCHOOL
FORMATIVE ASSESSMENT- OCTOBER 2021
WEEKLY HOME STUDY PACKAGE# 16
YEAR 5
ENGLISH- SOLUTIONS

Section A

Comprehension

**Read each passage carefully and then circle the letter of the best answer to Question 1 – 5 .
Circle the best answer:**

The Foolish Dog.

A dog was feeling hungry and he smelt some meat in the Prasad’s house. He went inside stole the meat and run away, holding it in it’s mouth.

As he crossed the bridge, he looked down into the water and thought he saw another dog also holding some meat in it’s mouth. The foolish dog did not realize it was his reflection.

He decided to steal from the ‘other dog’ and jumped into the water. As he jumped, he opened his mouth to bark and the meat fell into the water.

The foolish dog swam to the river bank and climbed out.

“I was too greedy,” he said to himself. “I should have been happy with the first piece of meat.”

Questions:

1. The dog stole the meat from a

- A. garden B. bridge **C.** house D. river

2. What did the dog see in the river?

- A. some meat **B.** another dog C. A photograph D. cow

3. The dog was greedy (line 8) because he wanted to

- A. jumped into the river **B.** have two pieces of meat
C. cross the bridge D. bark at another dog

4. The word foolish (line 4) means

- A. hungry B. proud C. sad **D.** silly

5. The word realize (line 4) means

- A. think B. tell C. ask **D.** know

Section B.

Grammar

Circle the letter of the correct answer.

1. _____ Seema was late to school, she was able to complete her morning work.
A. Since B. Because **C. Although** D. Until
2. Mr Seru was _____ so fast that he did not see the cow on the road.
A. drive **B. drove** C. driven D. driving
3. As I was walking _____ the mango tree, I tripped and fell on the stones.
A. forward B. up **C. towards** D. above
4. Which of the following is **not spelt** correctly.
A. deceive **B. cheerfull** C. committee D. decision
5. Jone likes helping his father, _____ ?
A. does he. **B. doesn't he** C. do he D. didn't he

Section C

Poetry

Read the poem given below and answer the question that follow.

Open a Book
Open a book
And you will find,
People and places of every kind.
Open a book
And you can be,
Anything you want to be.
Open a book
And you can share,
new words you find in there.
By Jimmy Mat

a] The title of the poem is

Open a book

[b] Who is the poet of the poem?

Jimmy Mat

[c] Give **two** words that rhyme.

find, kind or **share, there**

Section D

Pronouns

Underline the correct pronouns.

1. The house does not belong to (he , him)
2. This key is (my , me , mine)
3. (His, He) family love and respect him.
4. Shiv is a polite boy. I like (he, his, him) very much.
5. Mr Kumar is a shopkeeper. (He, She) used to be a teacher.

Section E

Fill in the blanks

Select the appropriate suffix from the list to form the new word. Rewrite the word again in the blank space provided.

ship, full, work, al, ly

1. Thank - Thankful
2. Home - Homework
3. Slow - Slowly
4. Friend - Friendship
5. Logic - Logical

NADI SANGAM PRIMARY SCHOOL
FORMATIVE ASSESSMENT- OCTOBER 2021
SOCIAL STUDIES- SOLUTION

SECTION A

MULTIPLE CHOICE

Circle the correct answer.

1. _____ farming is done in large scale and is for selling purpose.
A. Subsistence Commercial
B. Terrace D. Contour

2. Which of the following is an example of unfriendly land use?
 Spraying chemicals C. Weeding
B. Organic farming D. Afforestation

3. _____ is planting of variety of crops.
A. Agroforestry C. Terrace farming
B. Contour farming Multi- cropping

4. What does letter “N” in map reading indicate?
A. Title C. Symbol
B. Scale Direction

5. _____ is the activity of growing and raising livestock.
A. Mapping Farming
B. Land use D. Afforestation

SECTION B

TRUE or False

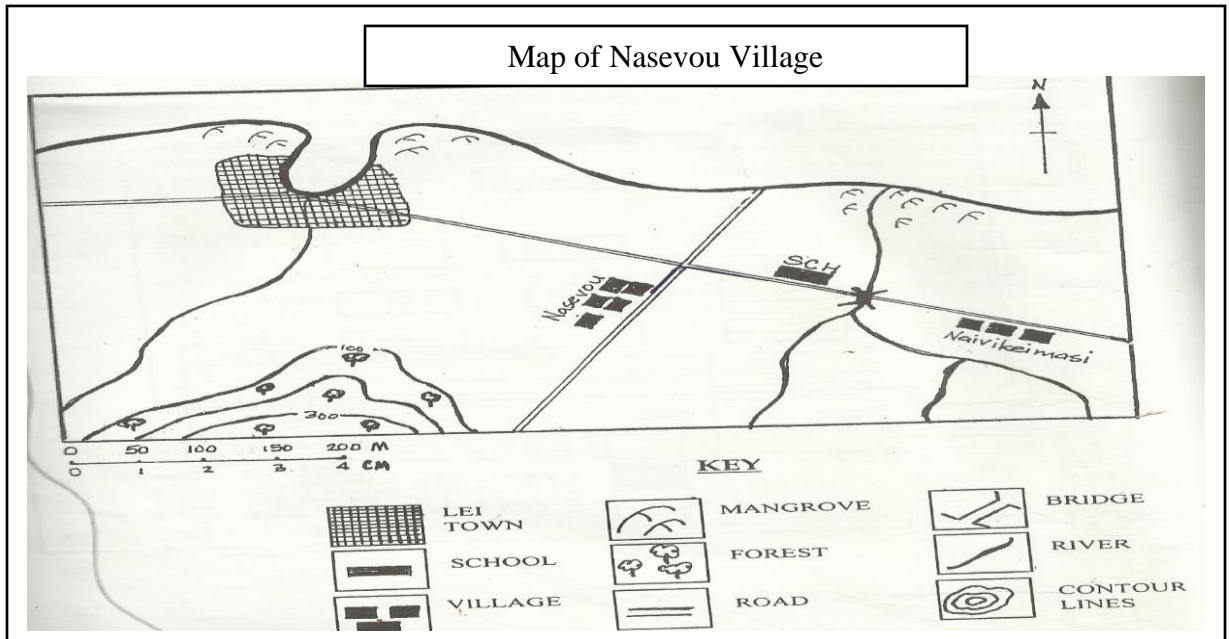
Write ‘TRUE’ or ‘FALSE’ for the following questions:

1. Subsistence farming does not require special skills. **TRUE**
2. Map is drawing of a place seen from above. **TRUE**
3. Export is buying of goods from other countries. **FALSE**
4. Resources are things that helps us to satisfy our wants. **FALSE**
5. Sugar industry depends on farmers on the quantity of cane they produce. **TRUE**

SECTION C

Mapping

Study the map given below and answer the questions that follow.



1. How many families live in Nasevou village?

5 families

2. What does the following symbol indicate?



Lei town

3. What is the symbol of forest?



4. How can a map be useful to tourist?

It helps them to locate places

5. What is the title of the map?

Map of Nasevou village

SECTION D

SHORT ANSWERS

Answer the following questions:

1. How can we can conserve resources?

By using it wisely

2. Write one disadvantage of commercial farming.

- Causes pollution
- Destroys habitats

3. How does government provide assistance to farmers?

By providing:

- Training
- Tools
- Fertilizers
- Seedlings
- Advice

4. List six main features of a map.

- Title
- Scale/ distance
- Symbol
- Direction
- Map key/ Legend
- Contour lines

5. In what ways does people use land.

Farming/ building houses, roads, bridges/ building hotels/ recreational facilities

NADI SANGAM PRIMARY SCHOOL
FORMATIVE ASSESSMENT- OCTOBER 2021
ELEMENTARY SCIENCE- SOLUTION

SECTION A

MULTIPLE CHOICE

Circle the correct answer.

1. _____ is the ability to make things move.
C. Electricity
 Energy
C. Light
D. Battery
2. A _____ is a device which makes electric current smaller or larger.
C. Torch
D. Circuit
C. Radio
 Transformer
3. The electricity flows from the _____ terminal of the battery through the _____ terminal of the battery.
C. Positive, Negative
D. Negative, Bulb
 Negative, Positive
D. Positive, Bulb
4. Where are transformers used?
C. Home
 Power stations
C. School
D. Shops
5. A complete circuit consists of switch, battery, wire, and _____.
C. Power point
 Bulb
C. Electricity
D. Transformer

SECTION B

MATCHING

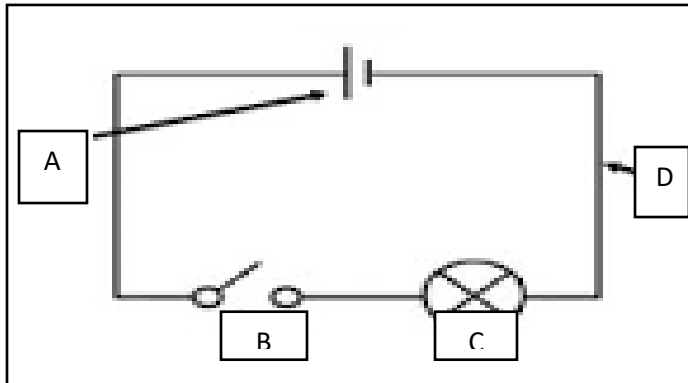
Write the correct letter of the answer in the box provided.

- | | | |
|-------------------|--------------------------------|---|
| 1. Plane mirror | <input type="text" value="C"/> | A. image gets bigger when object gets closer to mirror |
| 2. Convex mirror | <input type="text" value="E"/> | B. is path that allows electricity to pass through |
| 3. Concave mirror | <input type="text" value="A"/> | C. image is same size as the object |
| 4. Circuit | <input type="text" value="B"/> | D. pushes current around the circuit |
| 5. Battery | <input type="text" value="D"/> | E. image gets smaller when object gets closer to mirror |

SECTION C

DRAWING AND LABELLING

1. Label the parts of the circuit given below.



A- Battery


B- Switch

C- Bulb

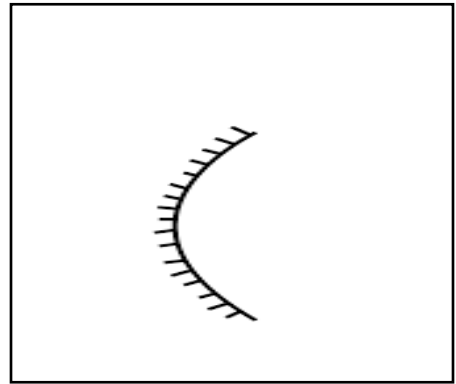
D- Wire

2. Draw the following:

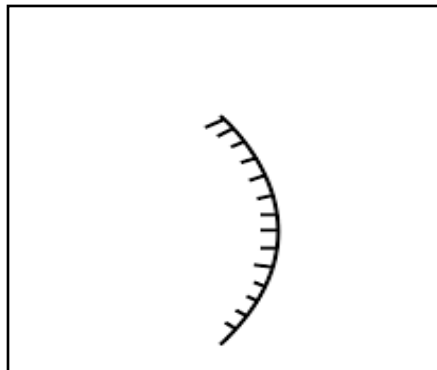
a. A transformer



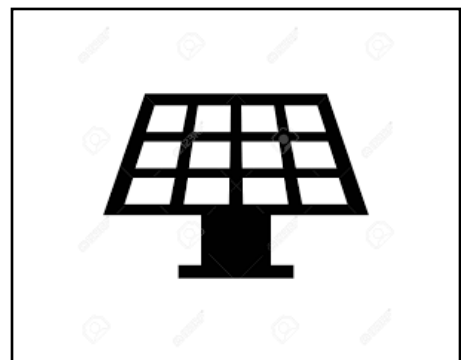
b. Concave mirror



b. Convex mirror



d. Solar panel



SECTION D

SHORT ANSWER QUESTIONS

Write the correct answer in the space provided.

1. What is non-renewable energy? Give one example.
Energy that cannot be easily replaced
Example: fossil fuel (coal, oil, gas)
2. What type of mirror do we usually use at home?
Plane mirror
3. Give one disadvantage of series connection.
If one component fails, the entire circuit becomes broken and none of the components will work.
4. Where is biomass energy obtained from?
Plants and animals
5. What kind of energy is mostly used in Fiji?
Energy from oil and natural gas

NADI SANGAM PRIMARY SCHOOL
FORMATIVE ASSESSMENT- OCTOBER 2021
HEALTHY LIVING- SOLUTION

SECTION A

MULTIPLE CHOICE

Circle the correct answer.

1. Which of the following is an example of personal cleanliness?
E. Sweeping classroom
 Wearing clean clothes
C. Raking compound
D. Cleaning bathroom
2. _____ teeth are used for tearing food.
E. Incisors
F. Molars
C. Premolars
 Canine
3. How many layers does skin consists of?
 3
F. 5
C. 4
D. 6
4. _____ is the hygienic way of disposing and recycling waste.
E. Hygiene
F. Cleanliness
C. Disposal
 Sanitation
5. Which of the following disease is caused by germs?
E. Heart attack
F. Marasmus
 Diarrhea
D. Diabetes

SECTION B

FILL IN THE BLANKS

Use the words from the box to complete the following sentences.

Hygiene	Toilet	Teeth	Body	Microorganisms
---------	--------	-------	------	----------------

1. Teeth helps to chew and digest food.
2. Human faeces carry harmful microorganisms.
3. Good personal hygiene helps to protect people from diseases and illness.
4. It is important to wash our hands after visiting the toilet.
5. Good habits can help control body odour and bad breath.

SECTION C

MATCHING

Write the correct letter of the answer in the box provided.

- | | | |
|------------------|--|---------------------------------|
| 1. Epidermis | <div style="border: 1px solid green; padding: 2px; display: inline-block;">C</div> | A. is the body's longest organ |
| 2. Care of skin | <div style="border: 1px solid green; padding: 2px; display: inline-block;">E</div> | B. always sun dry |
| 3. Care of teeth | <div style="border: 1px solid green; padding: 2px; display: inline-block;">D</div> | C. is the top layer of the skin |
| 4. Skin | <div style="border: 1px solid green; padding: 2px; display: inline-block;">A</div> | D. visit dentist regularly |
| 5. Beddings | <div style="border: 1px solid green; padding: 2px; display: inline-block;">B</div> | E. avoid using strong soaps |

SECTION D

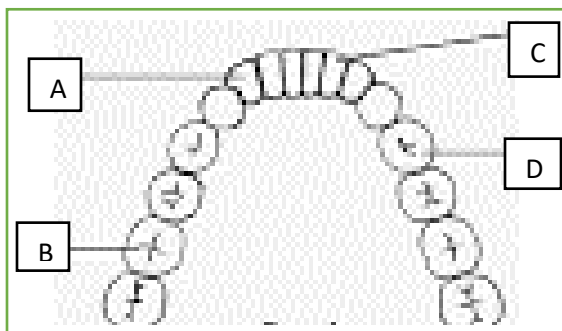
SHORT ANSWER QUESTIONS

Write the correct answer in the space provided.

- Why is it important to dispose human waste properly?
 - To avoid contamination of water
 - To avoid spread of germs related diseases
- List the 8 steps of hand washing.
 1. Rinse hand
 2. Apply soap
 3. Rub palms
 4. Finger interlaced
 5. Wash back of hands
 6. Wash base of thumb
 7. Wash fingernails
 8. Wash the wrist
- What are premolars teeth used for?

It is used for crushing food
- Why should we wash our face with face cleansers?

To avoid acnes and other skin problems
- Label part A, B, C and D.



- A- Canine
- B- Molars
- C- Incisors
- D- Premolars

1076 NADI SANGAM SCHOOL
FORMATIVE ASSESSMENT- OCTOBER 2021
WEEKLY HOME STUDY PACKAGE# 16
YEAR 5 – HINDI SOLUTION

क) रिक्त स्थानों को दिए गए शब्दों से भरो।

ने, का, में, कि, की, से, को

१. क्या तुम उस आदमी **को** जानते हो ?
२. रमन **की** माँ बीमार है।
३. मुझ **से** यह काम नहीं हो सकेगा।
४. शनिवार को शहर **में** अधिक भीड़ रहती है।
५. क्या तुम चाहते हो **कि** मैं तुम्हारे साथ चलूँ ?

ख) कोष्ठक में से सही शब्दों को चुनकर इन वाक्यों को पूरा करो।

१. उस **की** टोपी गिर गई। (की, का)
२. बच्ची भूख से **रोती** है। (रोता, रोती)
३. रमेश तो अभी विवाह नहीं **करेगा**। (करेगी, करेगा)
४. गाय दूध **देती** है। (देता, देती)
५. वे बच्चे अधिक शोर **मचाते** हैं। (मचाता, मचाते)

ग) रेखांकित शब्दों के विलोम शब्द लिखो।

१. घर के अंदर अधिक गर्मी है। **कम**
२. मालिक बहुत दयालु है। **नौकर**
३. वह हमेशा रोता है। **हँसता**
४. नदी का पानी बिल्कुल मैला है। **साफ**
५. फिजी देश में कई लोग सुखी हैं। **दुखी**

घ) इन शब्दों को सुधार कर लिखो।

१. फिजी - **फिजी**
२. पीताजि - **पिताजी**
३. पुसतक - **पुस्तक**
४. अधयापक - **अध्यापक**
५. पठशाला - **पाठशाला**

Nadi Sangam School

Formative Assessment- WHSP# 16

October 2021

Vernacular I Taukei Solution

Kalasi: -

Yacamu: -

WASEWASE A

Vola na kedra vosa sucu ka rawa ni buli mai na veivosa oqo

1. Yadra - vakayadra, yadrayadravaki, vakayadrati, vakayadrataki
2. Tama - tamana, tamadra, vakatamani, tamatama
3. Dabui - veidabui, dabuiloa, veidabuitaka
4. Bula - vakabulai, vakabula, bulabula, veivakabulataki
5. Kida - kidavaki, veikidavaki, kidavaka, kidacala
6. Cobo - cobota, vakacobocobo, cobora, coboi

WASEWASE B

Tuvana ena kedra veitarataravi dodonu na veiyatuvosa soli koto oqori era.

- a. Au a qai kauta vei Nau.
- b. A tavuna ko koya.
- c. Au a siwata rawa e dua na ika.
- d. A kania na ika koya ko tamaqu.
- e. Au a varia sara ka tunaka.

Tuvatuva dodonu

1. C - Au a siwata rawa e dua na ika.
2. E - Au a varia sara ka tunaka.
3. A - Au a qai kauta vei Nau.
4. B - A tavuna ko koya.
5. D - A kania na ika koya ko tamaqu.

WASEWASE C

Saumi Taro

1. Ni da kalawa, na tiki ni yagoda cava eda na vakayagataka?
Ni da kalawa, eda na vakayagataka na yavada.
2. Na cava soti nai tavi nei matanivanua?
Nai tavi nei matanivanua oya me dau rabeta na mena yaqona na turaga, gusu ni vosa, gusu ni turaga ka gusudra na lewe ni vanua ki vei ira na turaga.
3. Nai tutu vakavanua cava ka dau nona I tavi me rabeta na mena yaqona na turaga?
Na matanivanua

4. A cava na I balebale ni vosa oqo na leqa na qio qai kata?
E kena I balebale ni sa dau toka rodo se toka leqa sa qai yavala.

5. Vakamacalataka sara mada se cava na tabua?
Na tabua na I yau talei, dokai ka rokovi ki vei keda na I taukei.

WASEWASE D

Vakacuruma vakadodonu na veivosa oqori kin a veiyatuvosa oqo.

Vatonaka	baleca	vakacabora	coboti	matanivanua
	Gusu ni vosa / ni vanua		gusu ni turaga	

1. E dau **coboti** na yaqona ni sa lose oti.
2. E rabeta na mena yaqona na turaga ko **matanivanua**.
3. Au a **vakacabora** na neitou I sevusevu.
4. Ko matanivanua e **gusu ni vosa / vanua** ka **gusu ni turaga**.
5. E dau **vatonaka** na kamunaga ko matanivanua.

NADI SANGAM SCHOOL
HOME STUDY PACKAGE # 16- Solutions
COMPUTER STUDIES- Assessment
YEAR 5

Section A: Multiple Choice

1. A _____ is an electronic device that carries out instructions in a program.
B. Computer
2. What makes a computer powerful?
A. Storage Abilities
3. One of the _____ of computers is that it works faster and more accurately.
A. Advantage
4. We use the computers to _____.
A. Send and receive emails
5. USB and DVD are examples of _____.
C. Storage Devices
6. The four functions of computers are _____.
D. Input, output, processing and storage
7. Which of the following storage device has the largest storage space?
B. Hard Disk
8. The USB stands for _____.
A. Universal Serial Bus
9. The processing of data takes place in the _____.
D. CPU
10. We use the storage devices to _____.
C. Save documents

Section B: Short Answer Questions

1. What is one advantage of using computers?

- works faster and more accurately
- use one piece of information again in different documents
- make calculations without mistakes and correct your English spelling
- store and keep track of your (electronic) documents
- send email and documents to distant relatives and business relations
- easy to find information you need through internet

2. List down two uses of computers?

- ✓ Drawing charts
- ✓ Sending and receiving emails
- ✓ Research – looking for information
- ✓ Writing letters and reports
- ✓ Storing papers and documents
- ✓ calculations and keeping accounts

3. Which keyboard key do we use to correct our mistakes?

Backspace Key

4. List the 4 functions of a computer?

Input, Processing, Output, Storage

5. Give two examples of storage devices?

Floppy Disk, USB, Hard Disk, CD, DVD