

LABASA SANGAM COLLEGE
AGRICULTURAL SCIENCE YEAR 9
WORKSHEET 13 FISHERIES **Total marks: 10**

NAME: _____

YEAR: _____

1. Differentiate between **Aquaculture** and **Mariculture**.

_____ (2marks)

2. Name **any two** aquatic organisms raised in Fiji using pond.

_____ (2marks)

3. Explain any **one** method of growing seaweeds.

_____ (2marks)

4. Explain why sea sponges are not cultivated in water which is **less than 5meters** in depth.

_____ (2marks)

5. Name the pearl producing organism in:

i) **Sea water**

_____ (1mark)

ii) **Fresh water**

_____ (1mark)

LABASA SANGAM COLLEGE
AGRICULTURAL SCIENCE YEAR 9
WORKSHEET 14 FISHERIES **Total marks: 10**

NAME: _____

YEAR: _____

1. Briefly explain how farmers produce pearls.

(2marks)

2. Explain **any one** planting materials that can be used for growing corals.

(2marks)

3. List down the **four** stages of growing coral.

(4marks)

4. Differentiate between the terms **Algaculture** and **Periculture**

(2marks)

Name:

Year:

LABASA SANGAM (SKM) COLLEGE

SHORT TEST – 2021

AGRICULTURAL SCIENCE YEAR 9

Total marks: 20

1. The colourful marine animal which is cultivated and harvested to use for cleaning purposes, including personal hygiene, is the
A. oyster. B. octopus. C. sea sponge. D. coral polyp.
2. The fishing method which does **not** use fishing lines and hooks is
A. pole fishing. B. gleaning. C. trolling. D. jigging.
3. Which of the following items of jewellery is not a product of aquatic organisms?
A. Pearl ring C. Shell necklace
B. Coral earring D. Coconut shell earring
4. Ponds are constructed where there is enough sunlight so
A. algae can grow.
B. aquatic organisms can find their food.
C. aquatic organisms are provided with warmth.
D. aquatic organisms can get Vitamin D.
5. Which of the following harvesting methods of fish is traditional?
A. Jigging B. Harpooning C. Gill netting D. Purse seine nets

(5marks)

6. Match the descriptions in List B with the terms in List A.

Answer	Fishing method	Description
	1. Long lining	where the fisherman holds the line.
	2. Trolling	line is attached to a pole.
	3. Pole fishing	fisherman keeps moving the bait or lures to attract fish.
	4. Jigging	one or more lines are baited and drawn through the water.
	5. Hand held hook and line	a main line about 50kg long supporting a number of short vertical lines carrying baited hooks.

(5marks)

7. Outline **five** steps involved in preparing the structure before introducing the fry?

[illegible]

8. What **time of the day** is best for stocking fry into the pond and explain why?

(2marks)

9. a) What will happen if **water level is too low** inside the pond?

(1mark)

b) Explain what will happen if there is **too much algae** in the pond water?

(1mark)

10. Name an aquatic organism that is used as a cleaning material.

(1mark)

HOME STUDY PACKAGE

LABASA SANGAM COLLEGE

WORKSHEET 13 BASIC SCIENCE -10 MARKS

NAME: _____ YEAR: _____ DUE DATE: 19/10/2021

1. Differentiate between transparent and translucent materials and give 1 example each (4 marks)

2. Define ray (1 mark)

3. Draw and label the plane mirror in the space provided (2 marks)



4. Draw and lable the concave mirror (3 marks)



NAME: _____

YEAR: _____

HOME STUDY PACKAGE

School: Labasa Sangam(SKM) College

Due Date: 18th October 2021

Week: 13/worksheet: 1-3

Subject: Basic Technology

Date: 27th September -1st October 2021

Year/Level: 9A/B/C/D/E

Question: 1**(10 marks)****Given:** The plan of a Hexagonal Pyramid (axis=50mm) drawn in first Angle Orthographic projection.**Required:**(i) Complete the Front Elevation.**(2 marks)**

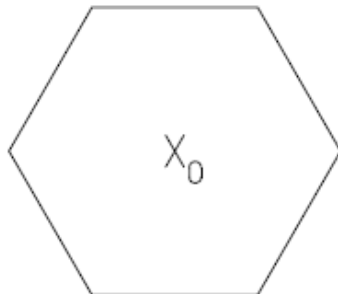
(ii) Draw the full Surface development on starting point "O".

(7 marks)

(iii) Name the method of development used: _____

(1 mark)**Note:** Do not Erase the construction lines

Question:1			
i	Correct line work	1	
	Correct Front elevation is drawn	1	
ii	Projection/True length lines	1	
	Correct outline shown	1	
	Accuracy	1	
	Correct shape	2	
	Correct line work	1	
	Neatness	1	
iii	Correct name	1	

V**H**

Question:2

(10 marks)

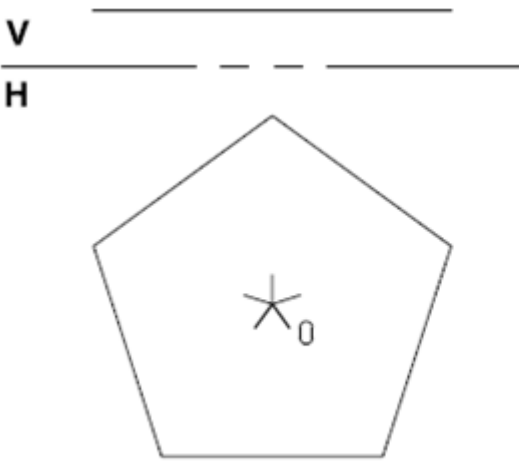
Given: The plan of a Pentagonal Pyramid (axis=50mm) drawn in first Angle Orthographic projection.

Required:(i) Complete the Front elevation. **(2 marks)**

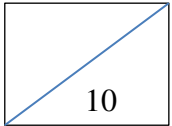
(ii) Draw the full Surface development on starting point “O”. **(7 marks)**

(iii) Name the method of development used:_____ **(1 mark)**

Note: Do not Erase the construction lines



Question:2			
i	Correct line work	1	
	Correct Front elevation is drawn	1	
ii	Projection/True length lines	1	
	Correct outline shown	1	
	Accuracy	1	
	Correct shape	2	
	Correct line work	1	
	Neatness	1	
iii	Correct name	1	



WORKSHEET ASSESSMENT-WEEK 13

Question: 3

(10 marks)

Given: The plan of a Square Pyramid (axis=50mm) drawn in first Angle Orthographic projection.

Required:(i) Complete the plan.

(ii) Complete the Front elevation.

(2 marks)

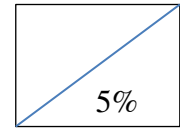
(iii) Draw the full Surface development on starting point “O”.

(7 marks)

(iv) Name the method of development used:_____

(1 mark)

Note: Do not Erase the construction lines

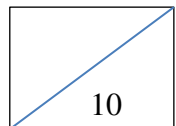
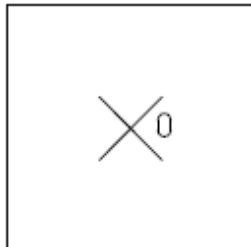


Question:3			
i	Correct line work	1	
	Correct Front elevation is drawn	1	
ii	Projection/True length lines	1	
	Correct outline shown	1	
	Accuracy	1	
	Correct shape	2	
	Correct line work	1	
	Neatness	1	
iii	Correct name	1	



V

H



HOME STUDY PACKAGE
LABASA SANGAM (SKM) COLLEGE
YEAR 9 ENGLISH

NAME: _____

YEAR 10: _____

WEIGHTING: 10%

DUE DATE: 4TH OCTOBER

Title: “Matupit’s First Businessman

1. What was Tomaana’s main source of income before he bought the truck?

_____ (1 mark)

2. How long did Tomaana work on his plantation before he could buy a new truck?

_____ (1 mark)

3. How did Tomaana use his truck to make money?

_____ (1 mark)

4. What would you have done if you were in place of Tomaana?

_____ (1 mark)

5. What was the relationship between the narrator and Tomaana?

_____ (1 mark)

Title: “ A Friend”

1. Describe how the story ends.

_____ (1 mark)

2. Do you feel pity for Etika? Give a reason for your answer.

_____ (1 mark)

3. Mention one incident from the story and state one lesson that you learnt from this incident.

_____ (1 mark)

4. Why do you think Wame is an admirable character?

_____ (1 mark)

5. Mention one useful lesson from the story and state how it affects you as a student.

_____ (1 mark)

HOME STUDY PACKAGE
LABASA SANGAM (SKM) COLLEGE
YEAR 9 ENGLISH

NAME: _____

YEAR 10: _____

WEIGHTING: 10%

DUE DATE: 4TH OCTOBER

Title: "Mateuteu (Be Prepared)"

1. State some of the precautions to take:

(a) **Before a hurricane**

_____ (1 mark)

(b) **During a hurricane**

_____ (1 mark)

(c) **After a hurricane**

_____ (1 mark)

2. Mention one character you admired from the story and give a reason for your answer

_____ (1 mark)

Title: "One Saturday Morning"

1 Why had Teresa's grandfather come from village?

_____ (1 mark)

2 What evidence is there from the story to show that he is very sick?

(1 mark)

3 What does he want from the market?

(1 mark)

4 Why is Teresa worried at the thought of getting crabs?

(1 mark)

5 Explain why she was feeling uneasy as she sat in the bus?

(1 mark)

6 Is she successful in buying the crab?

(1 mark)

THE END

HOME STUDY PACKAGE 5

LABASA SANGAM (SKM) COLLEGE

HOME ECONOMICS – YEAR 9

WORKSHEET

NAME: _____

YEAR: 9_____

DUE DATE: 18/10/2021

WORKSHEET: NATURAL FIBRES AND FABRICS

TOTAL MARKS: 10 marks

WEIGHTING: 5%

SHORT ANSWER QUESTIONS

Write the answers in the space provided.

1. Define the following terms:

(i) Staple fibres

(ii) Filament fibres

(2 marks)

2. Name the process which makes yarn from the fibres.

(1 mark)

3. List **two** ways in which fabrics can be made.

(i)

(ii)

(2 marks)

4. Identify the type of weave which produces a smooth and luxurious cloth.

(1 mark)

5. State the function of the following fabric finishes.

(i) Waterproof

(ii) Mercerization

(2 marks)

6. Differentiate between printing and dyeing.

(2 marks)

WORKSHEET: DESIGN WITH CLOTHES

TOTAL MARKS: 10 marks

WEIGHTING: 5%

SHORT ANSWER QUESTIONS

Write the answers in the space provided.

1. Discuss **two** reasons for wearing clothes.

(i) _____

(ii) _____

(2 marks)

2. Identify the traditional attire for the following:

(i) I-taukei men - _____

(ii) Indian women - _____

(2 marks)

3. Give a reason:

The need for strength and quality of fabric is not important for teenage clothing.

(1 mark)

4. Define: Mix and match

(1 mark)

5. Differentiate between readymade garments and homemade garments.

(2 marks)

6. State **two** personal benefits of recycling.

(i)

(ii)

(2 marks)

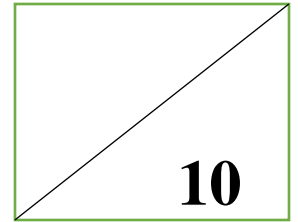
THE END

LABASA SANGAM (SKM) COLLEGE

DEPARTMENT OF MATHEMATICS

WORKSHEET 13

YEAR 9 – 2021



Name: _____

Year: 9 ____

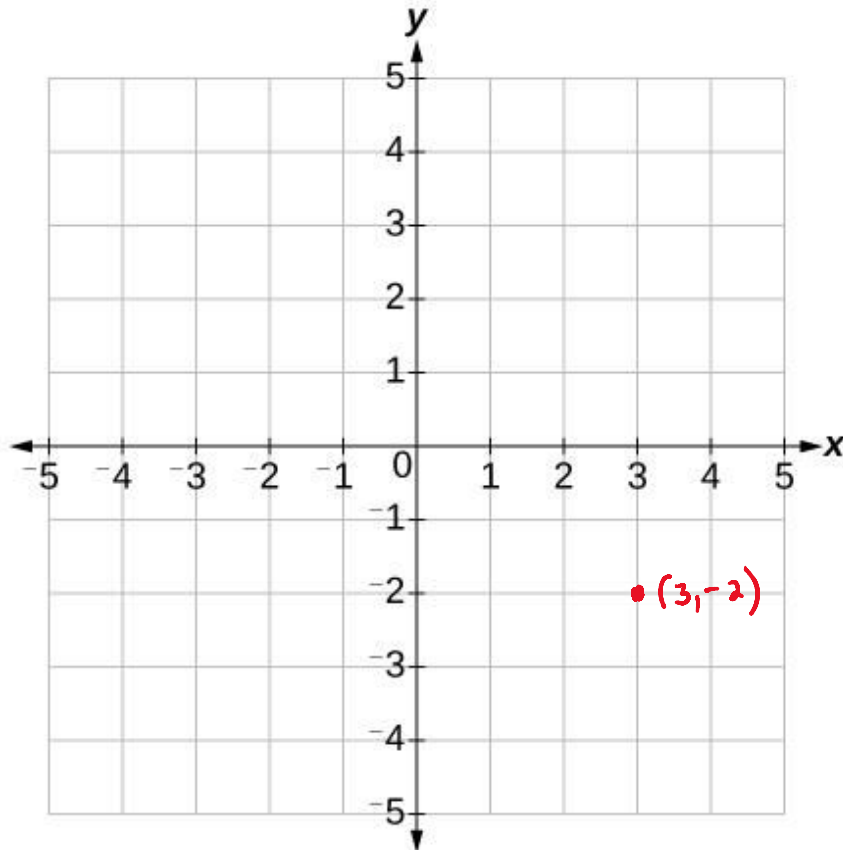
INSTRUCTIONS:

- Write your name and year on this paper.
- All the questions are compulsory.
- This worksheet is due on 18th October 2021 and needs to be returned to school on time.

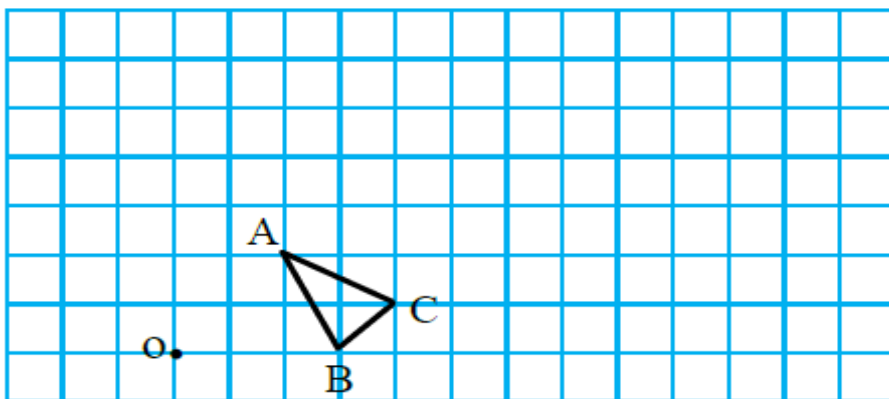
Use batch 4 and batch 5 notes to answer the following questions.

- Work out the coordinates of the image of $(3, -2)$ under the following angles of rotation. Use the following Cartesian plane to answer all these 4 questions below. Label the answers with a, b, c and d as per the question.

- -90° about the origin. (1 mark)
- 180° about the origin. (1 mark)
- 90° about the origin. (1 mark)
- 270° about the origin. (1 mark)

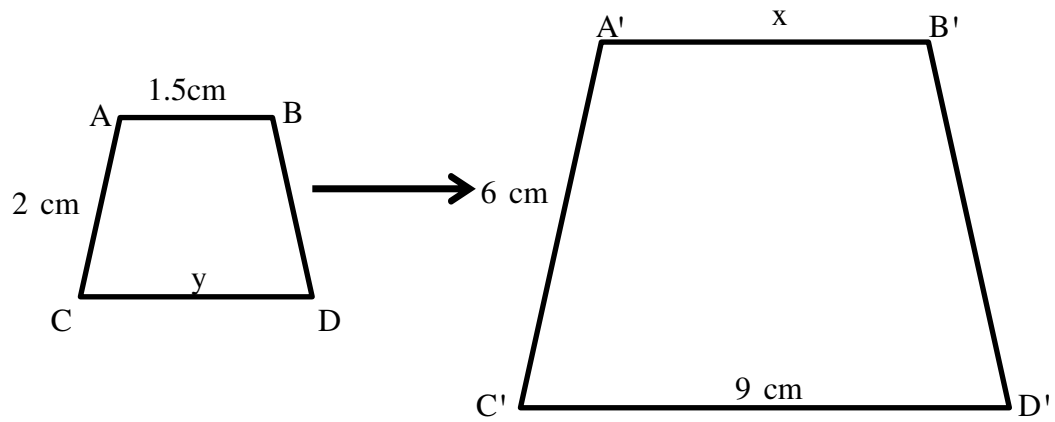


- Enlarge $\triangle ABC$ by a scale factor 3 with centre of enlargement O and label it as $A'B'C'$.



(2 marks)

3. If the area of ABCD is 24 cm^2 , what would be the area of A'B'C'D'?



a. Find the length scale factor.

b. Find the value of x and y.

(1mark)

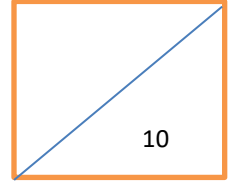
c. Find the area scale factor.

(1mark)

d. If the area of ABCD is 24 cm^2 , what would be the area of A'B'C'D'?

(1mark)

(1mark)

HOME STUDY PACKAGE 5**LABASA SANGAM (SKM) COLLEGE****OFFICE TECHNOLOGY-2021****YEAR 9****WORKSHEET 13****CHAPTER 3 :USING APPLICATION SOFTWARE****DUE DATE FOR SUBMISSION : 19TH OCTOBER****Weighting 5 %****Marks: 10****FULL NAME:_____****YEAR:_____****STRAND –COMPUTER CONCEPTS AND SKILLS****SUB-STRAND – USING APPLICATION SOFTWARE****Instructions****Read your notes from chapter 3 (using application software) and answer your worksheets**

1. Define computer?

(1 Mark)

2. Explain the term data?

(1 Mark)

3. List and explain 3 main components of a computer?

(3 Marks)

4. Define the term hardware?

(1 Marks)

5. Define the following terms:

a) Mouse

(1 Marks)

b) Keyboard

(1Mark)

6. Differentiate between system software and application software?

(2 marks)

LABASA SANGAM (SKM) COLLEGE

YEAR 9 SOCIAL SCIENCE WEEKLY PACKAGE 2021

WEEK 13 WORKSHEET

Name of the student: _____

Year: _____

SHORT ANSWER QUESTIONS

Use the notes given to you and your knowledge to answer the questions that follows. Each question is worth **2 marks**.

1. According to your understanding on the *Occupation of the Pacific Islands*, in which time period was Fiji occupied and which islands were occupied 30-40,000 years ago?

.....
.....

(2 marks)

2. Imagine your family lives in the deep interior valley in the high mountains of Vanua Levu and usually eat rourou and bele and other vegetables. Explain how would your family be able to get fish from the coastal areas.

.....
.....

(2 marks)

3. Who were the beachcombers and state **one** impact they brought on the chiefs.

.....
.....

(2 marks)

4. Discuss **any two** contributions of the missionaries on the natives.

.....
.....
.....

(2 marks)

5. What was the Great Fiji Rush and mention **one** reason why many were tempted to come to Fiji during the Rush period?

.....
.....

(2 marks)

THE END

LABASA SANGAM (SKM) COLLEGE

YEAR 9 SOCIAL SCIENCE WEEKLY PACKAGE 2021

WEEK 14 WORKSHEET

Name of the student: _____

Year: _____

RESOURCE INTERPRETATION

(5 marks)



A



B

1. Identify the traditional leaders whose photographs are provided in the resource.

Leader A: _____ (½ mark) Leader B: _____ (½ mark)

2. Discuss why leader 'A' came to Fiji and mention the year in which he arrived.

.....
.....

(2 marks)

3. Explain the role of leader 'B' in the Battle of Kaba.

.....
.....

(2 marks)

SHORT ANSWER QUESTIONS

(5 marks)

1. Discuss what was the American Claim that Cakobau was tasked to pay.

.....
.....

(2 marks)

2. Mention the **two conditions** that Cakobau placed when he gave the offer for cession to Britain.

.....
.....

(2 marks)

3. State **one** reason Cakobau offered Fiji to Great Britain. _____

(1 mark)

THE END

LABASA SANGAM (SKM) COLLEGE

YEAR 9 SOCIAL SCIENCE WEEKLY PACKAGE 2021

WEEK 15 SHORT TEST

Name of the student: _____

Year: _____

PARAGRAPH WRITING

(5 marks)

In a paragraph, discuss the **four governments** that was attempted in Fiji before cession.

.....

.....

.....

.....

.....

.....

.....

.....

.....

.....

.....

.....

.....

.....

.....

.....

.....

.....

.....

.....

.....

SHORT ANSWER QUESTIONS

1. Discuss **any two** reasons why the attempt to form a government was a complete failure.

.....

.....

.....

.....

(2 marks)

2. Who was Thurston and state his role in Fiji's history.

.....

.....

(2 marks)

3. What was the significance of the year 1874?

.....

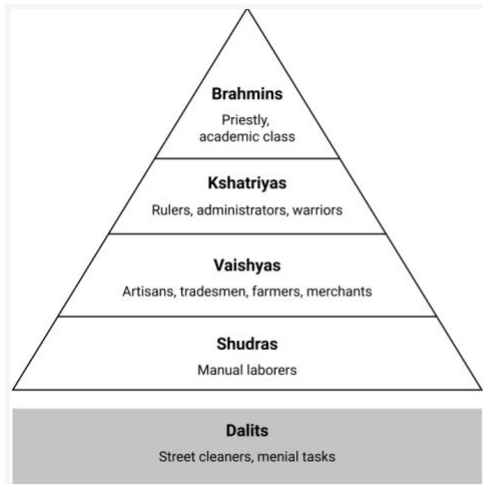
(1 mark)

REVISIONAL QUESTIONS

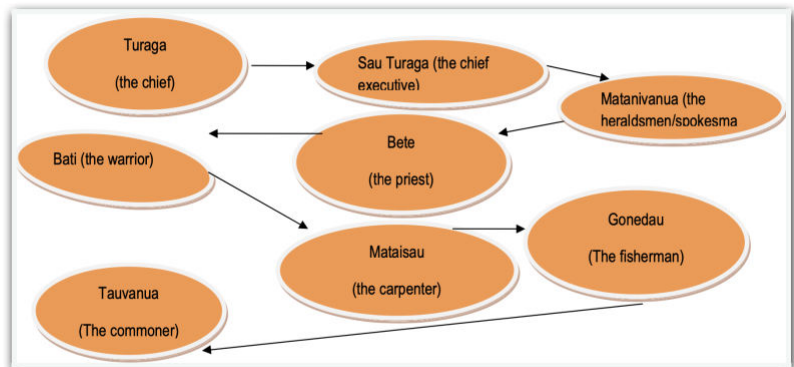
Use the notes that you have learnt in Term 1 before the break and answer the questions below.

RESOURCE INTERPRETATION

(10 marks)



A



B

1. Identify the **two** examples of traditional social structure in the resource.

.....

(2 marks)

2. Discuss **two** features of the social structure labelled 'A'.

.....

(2 marks)

3. Discuss the duties of the 'Gonedau' and 'Bati'.

.....

(2 marks)

4. Discuss the duties of the 'Shudras' and 'Vaishyas'.

.....

(2 marks)

5. Discuss the main difference between the traditional social structure and the modern social structure.

.....

(2 marks)

THE END