

NADI SANGAM SCHOOL

YEAR 3

WEEKLY HOME

STUDY PACKAGE





#18

SOLUTION








NADI SANGAM SCHOOL
WEEKLY HOME STUDY PACKAGE # 18 REVIEW TEST- SOLUTION
SUBJECT: MATHEMATICS – 20 marks
YEAR 3

SECTION A: MULTIPLE CHOICE (5marks)

	QUESTION	WORKING	ANSWER
1.	A pentagon has how many sides? A. 5 B. 6 C. 7		A
2.	Which of the following is a ray? A.  B.  C. 		B
3.	What is the chance of sun rising from the west? A. Possible B. Certain C. Impossible		C
4.	 What shape is this? A. Cone B. Cylinder C. Cube		B
5.	A cube has how many edges? A. 6 B. 8 C. 12		C

SECTION B: Match List A with List B (5 marks)

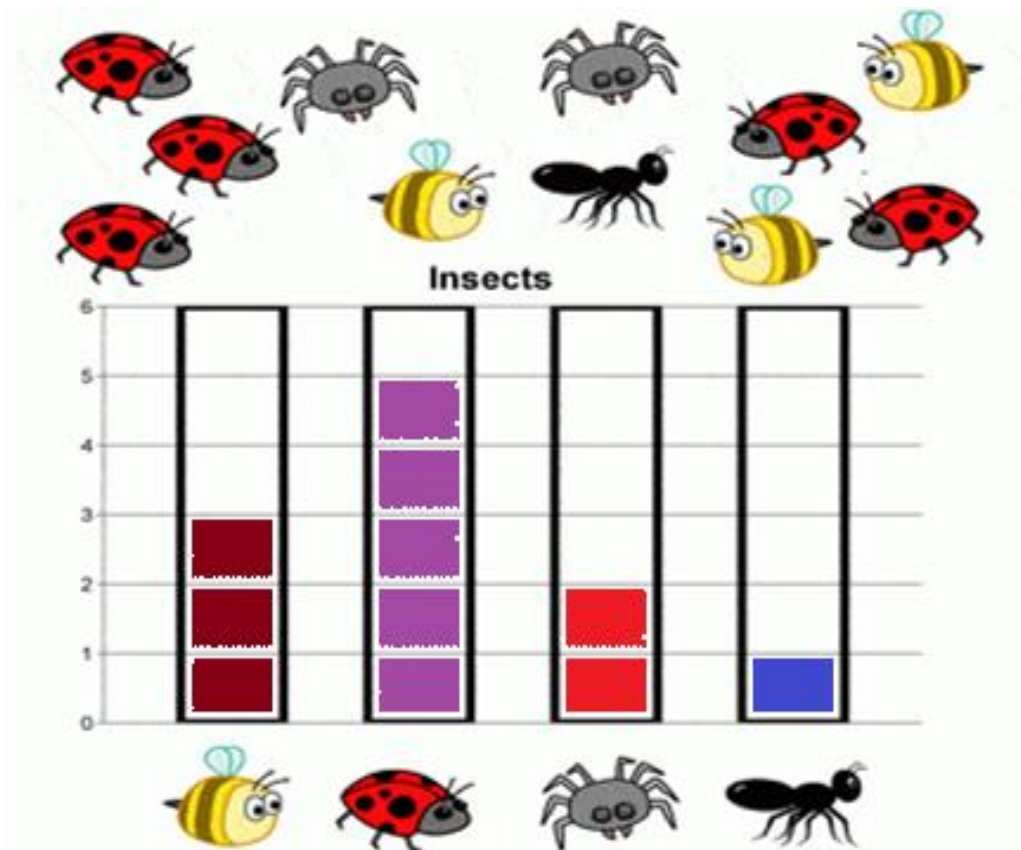
LIST A	ANSWER	LIST B
	C	A. Hexagon
	D	B. Rectangle
	B	C. Cuboid
	E	D. Line
	A	E. Curved line

SECTION C: State TRUE or FALSE (5m)

- 1). Length of a classroom can be measured in kilograms. FALSE
- 2). 754 rounded off to nearest hundreds is 800. TRUE
- 3). $\frac{1}{4}$ is smaller than $\frac{1}{3}$. TRUE
- 4). One fortnight equals two weeks. TRUE
- 5). A circle is a 3D shape. FALSE

SECTION D: Interpreting Graph. (5m)

Tina collected the following insects on her trip to the forest.



QUESTIONS

1. Count the insects and color in the correct number of squares in each column of the bar chart.
2. How many bees did Tina collect? 3
3. How many ants did she get? 1
4. Which insect did she find most? LADY BUG
5. How many insects did she collect in total? 11

1076 NADI SANGAM SCHOOL
WEEKLY HOME STUDY PACKAGE #18 (Solution)

REVIEW TEST

SUBJECT : English

YEAR/ LEVEL : 3

Marks : 20

Name : _____

Section A

Fill in the words to complete the paragraph.

him	she	I	he	my	we
-----	-----	---	----	----	----

My sister has gone to the swimming lessons during the holidays. **She** has learnt how to swim so well than **I** could. I am still learning how to swim from my father. My father is a very good swimmer and **he** promised us that he will make us better swimmers. **My** sister and I are planning to go to the river near our house for swimming every afternoon. I have a younger brother. My father does not allow **him** to swim. **We** will take part in the swimming competition.

(6 marks)

Section B

Word Formation .Make a new word by using the prefix or suffix.

Prefix

Suffix

Port - report

care - careless

Certain - uncertain

cheer - cheerful

Play - replay

hope - hopeless

Correct - incorrect

pain - painful

Polite - impolite

(9 marks)

Section C Join each pair of sentences using **before**.

1. I cleaned my teeth. I went to sleep.
I cleaned my teeth before I went to sleep.
2. We found some bait. We went fishing.
We found some bait before we went fishing.
3. I dug a hole. I planted a tree.
I dug a hole before I planted a tree.
4. I had my lunch. I went to play.
I had my lunch before I went to sleep.
5. The ship reached the island. It became dark.
The ship reached the island before it became dark.

(5 Marks)

NADI SANGAM SCHOOL
WEEKLY HOME STUDY PACKAGE # 18 REVIEW TEST
SUBJECT: HEALTHY LIVING– SOLUTION
YEAR 3

NAME: _____

SECTION A **MULTIPLE CHOICE** **5 MARKS**

Circle the letter of the correct answer.

1. Food contamination refers to food
 - A. that is freshly made
 - B. that has been made dirty by household pests.**
2. Which of the following is a safe food handling practice?
 - A. Wash your hands with soap and water.**
 - B. Cook your vegetables without washing them.
3. Dirty water should be _____ so that it can be used.
 - A. Collected and stored
 - B. Boiled**
4. A sickness caused by drinking dirty water is
 - A. Typhoid**
 - B. Dengue fever
5. Trachoma is a disease that causes roughening of the inner surface of the
 - A. Eyelid**
 - B. Ear drum

SECTION B **TRUE OR FALSE** **5 MARKS**

1. Drinking dirty water will make you sick. **TRUE**
2. Scabies is a water borne disease. **TRUE**
3. Mosquitoes spread dengue fever. **TRUE**
4. Mosquitoes lay their eggs in running water. **FALSE**
5. Scabies is an itchy skin disease caused by the burrowing mite. **FALSE**

1. What are two signs of water borne diseases?

Diarrhea and vomiting.

2. What is diarrhea?

Frequent watery stool.

3. What are some symptoms of food poisoning?

Symptoms of food poisoning are nausea, vomiting, stomach pain and diarrhea.

4. Name two sources of drinking water?

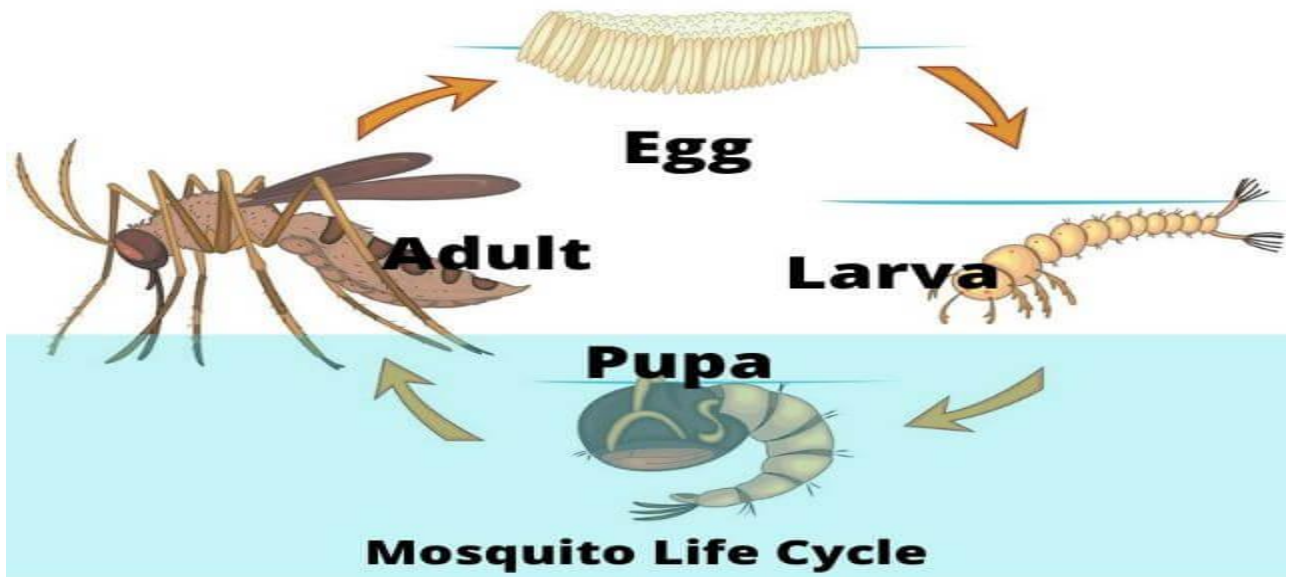
Tap and well.

5. State one good food handling practice.

Cover the food properly.

Always wash your hands before handling any of the food items.

6. Draw the life cycle of a mosquito.



NADI SANGAM SCHOOL
WEEKLY HOME STUDY PACKAGE # 18 REVIEW TEST
SUBJECT: SOCIAL STUDIES – SOLUTION
YEAR 3

NAME: _____

SECTION A TRUE AND FALSE 5 MARKS

1. The money that you receive after doing a particular job is called pay. **TRUE**
2. Personal belongings are things that belong to you. **TRUE**
3. Savings is the money that you spend on buying things. **FALSE**
4. Fiji is a multicultural country. **TRUE**
5. It is important to save money. **TRUE**

SECTION B FILLERS 5MARKS

Diwali	turban	Gurudwara
sari	Raqun	

1. Hindus celebrate **Diwali**.
2. **Raqun** is the traditional dress for the Chinese women.
3. Sikhs pray in the **Gurudwara**.
4. Hindu women wear **sari** as their traditional dress.
5. Sikh man wear **turban** on their heads.

SECTION C SHORT ANSWERS 7 MARKS

1. Name some personal resources that you have at your home.

Clothes, toothbrush, toys, bed and others.

2. Tom gets \$300 as his weekly wages/
His total expenses are \$200. How much will Tom save?
\$300 - \$200 = \$100 savings.

3. Write down two ways in which you can help your family to save money.
By not buying unnecessary things.
By using resources or things wisely.
4. What is budget?
Budget is a plan of spending the income that you earn,
5. Why is savings important?
So that you are able to plan your future.
So that you are able to save for your difficult times.

SECTION D

DRAW AND COLOUR

3 MARKS

1. Gurudwara



2. Temple



3. Church



1076 NADI SANGAM SCHOOL
WEEKLY HOME STUDY PACKAGE #18(Solution)
REVIEW TEST

SUBJECT : Elementary Science

YEAR/ LEVEL : 3

Marks : 20

Name : _____

Section A

Multiple Choice

(5m)

Underline the alphabet of the correct answer

1. The closest planet to the sun is _____.
A. Mars B. Saturn **C. Mercury** D. Venus
2. Earth is the _____ planet from the sun.
A. first B. last C. leaves **D. third**
3. Two _____ poles repel each other.
A. like B. sun C. unlike D. planets
4. The sun rises in the _____.
A. east B. clean C. west D. untidy
5. Sundial is used to tell the _____.
A. sun **B. time** C. news D. Sports

Section B

Write True or False

(5m)

1. Earth is the planet we live on. True
2. The Earth moves around the sun. True
3. The colours that we see reflected from white light are called a spectrum. True
4. There are eight colours in the rainbow. False
5. Candle flame is an example light energy. True

Section C

Short Answers

(10m)

1. How many moons does our planet Earth has?
Earth has one moon.
2. Name the seven colours in the rainbow ?
Red Orange Yellow Green Blue Indigo Violet
3. What is the name of the planet that we live on?
Earth
4. How many planets are there in our solar system?
Eight
5. Write down an example of sound energy
A baby crying A radio Aeroplane taking off

दी गई कहानी पढ़ें और नीचे दिए गए प्रश्नों के उत्तर लिखो।

लालची कुत्ता

बहुत दिनों की बात है, एक कुत्ते को एक रोटी मिली। उसने सोचा, “मैं यह रोटी ले जाऊँगा और अकेले बैठ कर खाऊँगा”।

वह रोटी लेकर चल पड़ा। रास्ते में एक नाला था। उस नाले पर एक पुल बना था। कुत्ता पुल पर होकर जाने लगा। उसने नीचे देखा। उसे पानी में अपनी परछाई दिखाई दी। उसने सोचा, “यह कोई दूसरा कुत्ता है और उसके मुँह में भी रोटी है। क्यों न मैं उसकी रोटी छीन लूँ”।

कुत्ता पुल पर खड़ा हो गया और जोर से भौंका। रोटी पानी में गिर गई और बह गई। कुत्ता चुपचाप चला गया।

भाग १

इन्हें पूर करो।

(५ m)

१. मैं यह रोटी ले जाऊँगा **और** अकेले बैठ कर खाऊँगा।
२. वह रोटी लेकर **चल** पड़ा।
३. उस नाले पर एक **पुल** बना था।
४. उसने **नीचे** देखा।
५. कुत्ता **चुपचाप** चला गया।

भाग २

विलोम शब्द

(५ m)

१. रात- दिन
२. साथ- अकेला
३. ऊपर- नीचे
४. धीरे -जोर
५. बैठा- खड़ा

भाग ३ दिए गए शब्दों में से संज्ञा शब्द पर गोला बनाइए। (३ m)

<u>रोटी</u>	खाऊँगा	चल
<u>कुत्ता</u>	<u>रास्ते</u>	छीन

भाग ४ दिए गए शब्दों में से क्रिया शब्द पर गोला बनाइए। (३ m)

रोटी	<u>खाऊँगा</u>	<u>चल</u>
कुत्ता	रास्ते	<u>छीन</u>

भाग ५ इस पूरी कहानी की तस्वीर बनाओ। (४m)

