


NADI SANGAM SCHOOL

YEAR 3





WEEKLY HOME STUDY

PACKAGE 18








**NADI SANGAM SCHOOL**  
**WEEKLY HOME STUDY PACKAGE # 18 REVIEW TEST**  
**SUBJECT: MATHEMATICS – 20 marks**  
**YEAR 3**

SECTION A: MULTIPLE CHOICE (5marks)

	QUESTION	WORKING	ANSWER
1.	A pentagon has how many sides? A. 5                      B. 6                      C. 7		
2.	Which of the following is a ray? A.  B.  C. 		
3.	What is the chance of sun rising from the west? A. Possible              B. Certain              C. Impossible		
4.	 What shape is this? A. Cone                      B. Cylinder                      C. Cube		
5.	A cube has how many edges? A. 6                      B. 8                      C. 12		

SECTION B: Match List A with List B (5 marks )

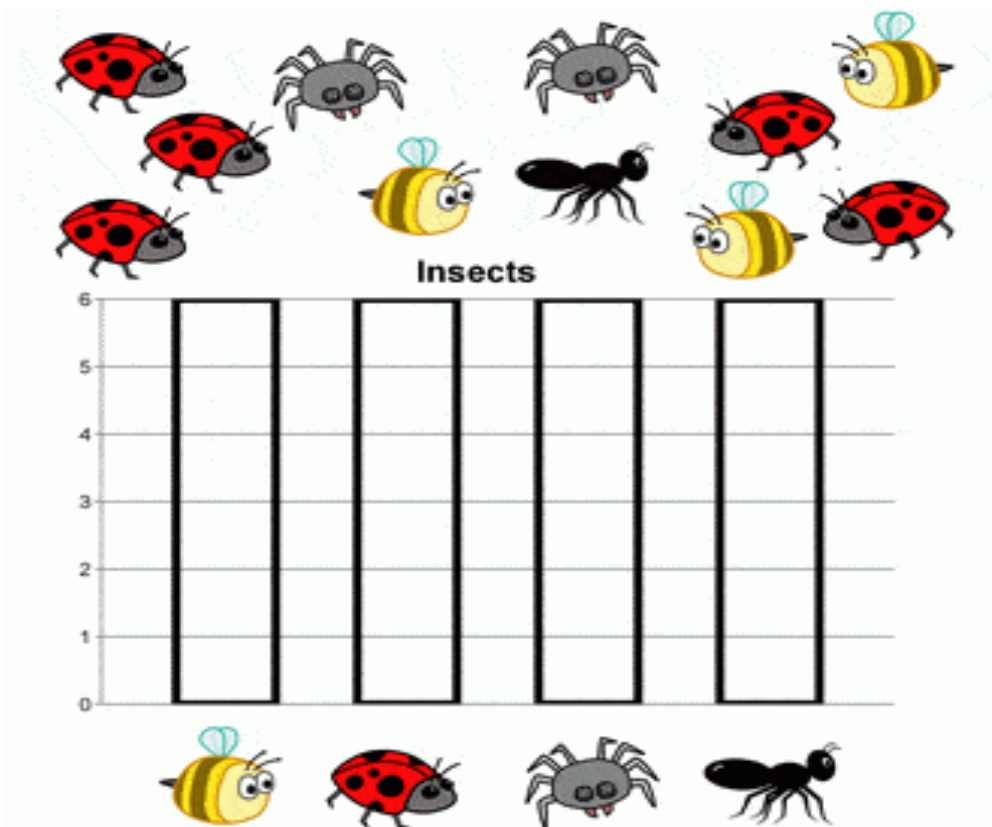
LIST A	ANSWER	LIST B
		A. Hexagon
		B. Rectangle
		C. Cuboid
		D. Line
		E. Curved line

**SECTION C: State TRUE or FALSE (5m)**

- 1). Length of a classroom can be measured in kilograms. \_\_\_\_\_
- 2). 754 rounded off to nearest hundreds is 800. \_\_\_\_\_
- 3).  $\frac{1}{4}$  is smaller than  $\frac{1}{3}$ . \_\_\_\_\_
- 4). One fortnight equals two weeks. \_\_\_\_\_
- 5). A circle is a 3D shape. \_\_\_\_\_

**SECTION D: Interpreting Graph. (5m)**

Tina collected the following insects on her trip to the forest.



**QUESTIONS**

1. Count the insects and color in the correct number of squares in each column of the bar chart.
2. How many bees did Tina collect? \_\_\_\_\_
3. How many ants did she get? \_\_\_\_\_
4. Which insect did she find most? \_\_\_\_\_
5. How many insects did she collect in total? \_\_\_\_\_

1076 NADI SANGAM SCHOOL  
WEEKLY HOME STUDY PACKAGE #18

REVIEW TEST

SUBJECT : English

YEAR/ LEVEL : 3

Marks : 20

Name : \_\_\_\_\_

**Section A**

**Fill in the words to complete the paragraph.**

him	she	I	he	my	we
-----	-----	---	----	----	----

My sister has gone to the swimming lessons during the holidays. \_\_\_\_\_ has learnt how to swim so well than \_\_\_\_\_ could. I am still learning how to swim from my father. My father is a very good swimmer and \_\_\_\_\_ promised us that he will make us better swimmers. \_\_\_\_\_ sister and I are planning to go to the river near our house for swimming every afternoon. I have a younger brother. My father does not allow \_\_\_\_\_ to swim. \_\_\_\_\_ will take part in the swimming competition.

(6 marks)

**Section B**

**Word Formation .Make a new word by using the prefix or suffix.**

**Prefix**

Port - \_\_\_\_\_

Certain - \_\_\_\_\_

Play - \_\_\_\_\_

Correct - \_\_\_\_\_

Polite - \_\_\_\_\_

**Suffix**

care - \_\_\_\_\_

cheer - \_\_\_\_\_

hope - \_\_\_\_\_

pain - \_\_\_\_\_

( 9 marks)

**Section C**

Join each pair of sentences using **before**.

1. I cleaned my teeth. I went to sleep.
2. We found some bait. We went fishing.
3. I dug a hole. I planted a tree.
4. I had my lunch. I went to play.
5. The ship reached the island. It became dark.

( 5 Marks)

1076 NADI SANGAM SCHOOL

WEEKLY HOME STUDY PACKAGE #18

REVIEW TEST

SUBJECT : Elementary Science

YEAR/ LEVEL : 3

Marks : 20

Name : \_\_\_\_\_

**Section A**

Multiple Choice

(5m)

Underline the alphabet of the correct answer

1. The closest planet to the sun is \_\_\_\_\_.  
A. Mars                      B. Saturn                      C. Mercury                      D. Venus
2. Earth is the \_\_\_\_\_ plant from the sun.  
A. first                      B. last                      C. leaves                      D. third
3. Two \_\_\_\_\_ poles repel each other.  
A. like                      B. sun                      C. unlike                      D. planets
4. The sun rises in the \_\_\_\_\_.  
A. east                      B. clean                      C. west                      D. untidy
5. Sundial is used to tell the \_\_\_\_\_ .  
A. sun                      B. time                      C. Fin                      D. Sports

**Section B**

Write True or False

(5m)

1. Jupiter is the largest planet in the solar system. \_\_\_\_\_
2. The Earth moves around the sun. \_\_\_\_\_
3. The colours that we see reflected from white light are called a spectrum. \_\_\_\_\_
4. There are eight colours in the rainbow. \_\_\_\_\_
5. Candle flame is an example light energy. \_\_\_\_\_

**Section C**

**Short Answers**

(10 m)

1. How many moons does our planet Earth has?

---

2. Name the seven colours in the rainbow ?

---

3. What is the name of the planet that we live on?

---

4. How many planets are there in our solar system?

---

5. Write down an example of sound energy

---

**NADI SANGAM SCHOOL**  
**WEEKLY HOME STUDY PACKAGE # 18 REVIEW TEST**  
**SUBJECT: SOCIAL STUDIES – 20 marks**  
**YEAR 3**

NAME: \_\_\_\_\_

**SECTION A TRUE AND FALSE 5 MARKS**

1. The money that you receive after doing a particular job is called pay. \_\_\_\_\_
2. Personal belongings are things that belong to you. \_\_\_\_\_
3. Savings is the money that you spend on buying things. \_\_\_\_\_
4. Fiji is a multicultural country. \_\_\_\_\_
5. It is important to save money. \_\_\_\_\_

**SECTION B FILLERS 5MARKS**

Diwali	turban	Gurudwara
sari	Raqun	

1. Hindus celebrate \_\_\_\_\_.
2. \_\_\_\_\_ is the traditional dress for the Chinese women.
3. Sikhs pray in the \_\_\_\_\_.
4. Hindu women wear \_\_\_\_\_ as their traditional dress.
5. Sikh man wear \_\_\_\_\_ on their heads.

**SECTION C SHORT ANSWERS 7 MARKS**

1. Name some personal resources that you have at your home.

\_\_\_\_\_

2. Tom gets \$300 as his weekly wages/  
His total expenses are \$200. How much will Tom save?

\_\_\_\_\_  
\_\_\_\_\_

3. Write down two ways in which you can help your family to save money.

---

---

4. What is budget?

---

---

5. Why is savings important?

---

---

**SECTION D                      DRAW AND COLOUR                      3 MARKS**

1. Gurudwara

2. Temple

3. Church



**NADI SANGAM SCHOOL**  
**WEEKLY HOME STUDY PACKAGE # 18 REVIEW TEST**  
**SUBJECT: HEALTHY LIVING– 20 marks**  
**YEAR 3**

NAME: \_\_\_\_\_

**SECTION A          MULTIPLE CHOICE          5 MARKS**

Circle the letter of the correct answer.

1. Food contamination refers to food
  - A. that is freshly made
  - B. that has been made dirty by household pests.
2. Which of the following is a safe food handling practice?
  - A. Wash your hands with soap and water.
  - B. Cook your vegetables without washing them.
3. Dirty water should be \_\_\_\_\_ so that it can be used.
  - A. Collected and stored
  - B. Boiled
4. A sickness caused by drinking dirty water is
  - A. Typhoid
  - B. Dengue fever
5. Trachoma is a disease that causes roughening of the inner surface of the
  - A. Eyelid
  - B. Ear drum

**SECTION B          TRUE OR FALSE          5 MARKS**

1. Drinking dirty water will make you sick. \_\_\_\_\_
2. Scabies is a water borne disease. \_\_\_\_\_
3. Mosquitoes spread dengue fever. \_\_\_\_\_
4. Mosquitoes lay their eggs in running water. \_\_\_\_\_
5. Scabies is an itchy skin disease caused by the burrowing mite. \_\_\_\_\_

1. What are two signs of water borne diseases?

---

---

2. What is diarrhea?

---

---

3. What are some symptoms of food poisoning?

---

---

4. Name two sources of drinking water?

---

---

5. State one good food handling practice.

---

---

6. Draw the life cycle of a mosquito.



**NADI SANGAM SCHOOL**  
**WEEKLY HOME STUDY PACKAGE # 18 REVIEW TEST**  
**SUBJECT: HINDI – 20 marks**  
**YEAR 3**

दी गई कहानी पढ़ें और नीचे दिए गए प्रश्नों के उत्तर लिखो।

## लालची कुत्ता

बहुत दिनों की बात है, एक कुत्ते को एक रोटी मिली। उसने सोचा, “मैं यह रोटी ले जाऊँगा और अकेले बैठ कर खाऊँगा”।

वह रोटी लेकर चल पड़ा। रास्ते में एक नाला था। उस नाले पर एक पुल बना था। कुत्ता पुल पर होकर जाने लगा। उसने नीचे देखा। उसे पानी में अपनी परछाई दिखाई दी। उसने सोचा, “यह कोई दूसरा कुत्ता है और उसके मुँह में भी रोटी है। क्यों न मैं उसकी रोटी छीन लूँ”।

कुत्ता पुल पर खड़ा हो गया और जोर से भौका। रोटी पानी में गिर गई और बह गई। कुत्ता चुपचाप चला गया।

भाग १

इन्हें पूर करो।

(५ m)

१. मैं यह रोटी ले जाऊँगा \_\_\_\_\_ अकेले बैठ कर खाऊँगा।
२. वह रोटी लेकर \_\_\_\_\_ पड़ा।
३. उस नाले पर एक \_\_\_\_\_ बना था।
४. उसने \_\_\_\_\_ देखा।
५. कुत्ता \_\_\_\_\_ चला गया।

भाग २

विलोम शब्द

(५ m)

१. रात- \_\_\_\_\_

२. साथ- \_\_\_\_\_

३. ऊपर- \_\_\_\_\_

४. धीरे \_\_\_\_\_

५. बैठा- \_\_\_\_\_

भाग ३ दिए गए शब्दों में से संज्ञा शब्द पर गोला बनाइए। (३ m)

रोटी

खाऊँगा

चल

कुत्ता

रास्ते

छीन

भाग ४ दिए गए शब्दों में से क्रिया शब्द पर गोला बनाइए। (३ m)

रोटी

खाऊँगा

चल

कुत्ता

रास्ते

छीन

भाग ५ इस पूरी कहानी की तस्वीर बनाओ। (४m)
