

**1076 NADI SANGAM SCHOOL**

**WEEKLY HOMESTUDY**

**PACKAGE # 17**

**SOLUTIONS**

**YEAR 4**

**1076 NADI SANGAM SCHOOL**

**YEAR 4**

**ENGLISH SOLUTIONS 17**

<b><u>Strand</u></b>	Writing and Shaping
<b><u>Sub-strand</u></b>	Text-Types-media, everyday communication and literary text.
<b><u>Content Learning Outcome</u></b>	Compose a range of simple imaginative and information texts.

**Composition Writing**

Write a composition on the topic **Diwali**.

Discuss the following points in your composition:

- Who celebrates Diwali?
- Why is Diwali celebrated?
- How is Diwali celebrated in your area?
- Name the sweets and snacks prepared on this day.

A sample Composition is given below where you can compare yours with.

**DIWALI**

*Diwali is an annua event which is mainly celebrated by Hindus. Diwali is celebrated to mark the return of Lord Ram after several years of captivity. People usually light up their homes and streets to welcome the royal return of Ram.*

*People who celebrated Diwali in my area were busy cleaning up their home. They decorate their home with different coloured lights and make many different kinds of sweets to share with their families and friends. Loud noises of fire crackers are also part of the celebration.*


*One of the main part of celebrating Diwali is eating of sweets. Some common ones I know are: Lahdu, Lakri mithai, jeleby, pera, kir, barafi, saina and many more.*

**1076 NADI SANGAM SCHOOL SOLUTIONS NO. 17**  
**YEAR 4 SUBJECT: MATHEMATICS**

<b>STRAND</b>	<b>CHANCE &amp; DATA</b>
<b>CONTENT LEARNING OUTCOME</b>	<i>Identify, order and predict the chance of events from least likely to most likely to happen</i>
<b>TOPIC</b>	<i>Likely, Unlikely, Certain and Possible</i>
<b>RESOURCES</b>	<i>Mathematics Pupils Bk 4</i>
<b>PAGE</b>	75


**A. NOTES    CHANCE AND DATA**

**ACTIVITY** (Underline the best answer for each question)




How likely are you to pick out a  $\triangle$ ?

Equal probability    Likely




How likely are you to pick out a  $\triangle$ ?

Unlikely    Likely




How likely are you to pick out a  $\circ$ ?

Impossible    Certain




How likely are you to pick out a  $\triangle$ ?

Unlikely    Possible




How likely are you to pick out a  $\star$ ?

Equal probability    Impossible




How likely are you to pick out a  $\square$ ?

Equal probability    Likely



How likely are you to pick out a  $\square$ ?

Certain    Possible



How likely are you to pick out a  $\triangle$ ?

More Likely    less likely

1076 NADI SANGAM SCHOOL

YEAR 4

HOME STUDY SOLUTIONS 17

ELEMENTARY SCIENCE

<b>Strand</b>	<b>Living Things and Environment</b>
<b>Sub Strand</b>	<b>Structure and Life Processes</b>
<b>Content Learning Outcome</b>	<b>Identify and classify plants</b>

Notes

- Plants can be classified using different features such as plants that live in water, shape of the leaves etc.
- Plants with flowers are known as flowering plants.
- Plants without flowers are known as non-flowering plants.



**Flowering Plant**



**Non-Flowering Plant**

Exercise

1.Name two flowering plants.

*Answers may vary depending on the flowering plants they know either in English or own dialect*

2.Name 2 non flowering plant.

*Answers may vary depending on the flowering plants they know either in English or own dialect*

3.List one feature that can be used to classify plants.

*(it has flowers, fruits or seeds)*

*One of the above*

<b>Strand</b>	<b>Human growth and Development</b>
<b>Sub Strand</b>	<b>Growth and Changes</b>
<b>Content Learning Outcome</b>	<b>Identify changes in boys and girls</b>

Notes

- Changes occur in boys and girls as they grow up.
- Changes in girls happen around 10-12 years of age.
- Changes in boys happen around 12-14 years of age.



Exercise

True/False

1. Changes occur in boys and girls as they grow up. **TRUE**
2. Changes in girls happen around 10-13 years of age. **FALSE (10-12)**
3. Changes in boys happen around 12-16 years of age. **FALSE (12-14)**

**1076 NADI SANGAM SCHOOL**


**YEAR 4 SOCIAL STUDIES**

**SOLUTIONS 17**

<b>Strand</b>	Time, continuity and change
<b>Sub Strand</b>	Understanding the past
<b>Content learning outcome</b>	Identify significant people in the community.

**Topic: Our Neighbors**

1. We all live in communities.
2. People who live close to us are our neighbours.
3. We should make friends with our neighbours because we live in the same neighbourhood.
4. We should always help each other in times of need.



**Write True/ False**

1. We all live in communities. **TRUE**
2. Those who live close to us are not our neighbors. **TRUE**
3. We should never make friends with our neighbors. **FALSE**
4. We should always help our neighbors in times of need. **TRUE**

**1076 NADI SANGAM SCHOOL**

**YEAR 4**

**HINDI PACKAGE 17 SOLUTIONS**

<b><u>Strand</u></b>	Writing and Shaping
<b><u>Sub-strand</u></b>	Text-Types-media, everyday communication and literary text.
<b><u>Content Learning Outcome</u></b>	Compose a range of simple imaginative and information texts.

**निबंध**

दीपावली पर एक निबंध लिखो

निबंध में आप नीचे दिए गए विषयों पर चर्चा कर सकते हो।

- दीपावली कौन बनाता है।
- दीपावली का महत्व क्या है।
- इस दिन आप क्या क्या करते हो?
- इस दिन घर पर कौन कौन से पकवान बनते हैं?

**दिवाली**

दिवाली हिंदुओं का सबसे लोकप्रिय त्योहारों में से एक है जिसे बहुत उत्साह और खुशी के साथ मनाया जाता है। दिवाली हर साल कार्तिक मास की अमावस्या को मनाया जाता है। या हिंदुओं का एक धार्मिक और सामाजिक पर्व है। इस दिन भगवान श्री राम 14 वर्ष के वनवास के बाद अयोध्या लौटे थे। उनके आने की खुशी में लोगों ने दीपक जला कर उनका स्वागत किया था।

दीपावली के कुछ दिन पहले से ही लोग अपने घरों की सफाई और पुताई करने में लग जाते हैं। बाजारों में कुछ दिन पहले से ही मिठाइयां, खिलौने, पटाखे, बीए आदि की दुकानें सजने लगती हैं।

इस दिन लक्ष्मी जी की भी पूजा होती है। सभी नए कपड़े पहनते हैं पटाखे फोड़ते हैं और खूब मस्ती करते हैं।

**1076 NADI SANGAM SCHOOL SOLUTIONS NO. 17**

**YEAR 4**

**SUBJECT: I TAUKEI**

STRAND	<i>NA VOLAVOLA KEI NA BULIBULI</i>
CONTENT LEARNING OUTCOME	<i>Veimataqali gaunisala ni veitaratara</i>
TOPIC	<i>Volai tukutuku</i>
RESOURCES	<i>Viti 4 – Wase 10</i>
PAGE	<i>32 - 35)</i>

**VEIKA ME VULICI**

**CAKACA ME QARAVI** (Vakacuruma na vanua e lala koto ena veivosa e ganita kei na veika o dau taleitaka).

**NA VEIKA AU DAU TALEITAKA**

Na noqu qito taleitaki na qito **RAKAVI**. Au dau qito **RAKAVI** kei **IRA NA NOQUI CABA** ena **VEIYAKAVI**. Au dau vakayagataka na noqu **POLO NI RAKA** niu dau qito.

Na noqu manumanu taleitaki na **KOLI**. Na yaca ni noqu koli ko **'CHICKS'**. E roka **DRAVUDRAVU** o koya. Keirau dau taubale ena veimataka kei na noqu **KOLI**. E dau tavaki ena mamarau o koya ena veisiga niu dau suka yani ena vuli.

Na noqu lesoni taleitaki e koronivuli na **'FIKA'**. Au taleitaka niu dau rawata kina na maka levu duadua ena gauna ni veitarogi.

Vei ira kece na ka au dau taleitaka, e uasivi duadua vei ira kece o **TAMAQU KEI TINAQU**.

Au taleitaki rau vakalevu baleta ni rau dau lomani au vinaka.