

NADI SANGAM SCHOOL

WEEKLY STUDY

HOME PACKAGE

# 22

SOLUTION

YEAR 3



**NADI SANGAM SCHOOL**  
**WEEKLY HOME STUDY PACKAGE # 22 REVIEW TEST - SOLUTION**  
**SUBJECT: MATHEMATICS – 25 marks**  
**YEAR 3**

**SECTION A: Multiple Choice (5 marks)**

	QUESTION	WORKING	ANSWER
1.	Round off 173 to nearest hundreds. A. 100                  B. 200                  C. 700		B
2.	A boy will weigh 20 ____ A. Grams                  B. kilograms                  C. liters		B
3.	$20c + 20c + 50c =$ A. 90c                  B. \$1.00                  C. \$9.00		A
4.	What is the chance of you meeting Fiji's President today? A. Possible                  B. Impossible                  C. Likely		B
5.	How many hundreds in 478? A. 8                  B. 7                  C. 4		C

**SECTION B: Use the  $<$  ,  $>$  ,  $=$  signs to complete the following statements (5 marks)**

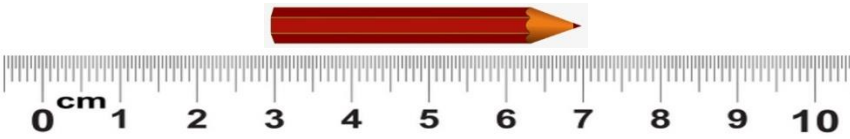
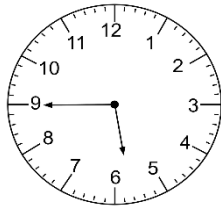


1 handspan	$<$	1 armlength
$18 + 4$	$=$	$4 + 18$
$\frac{1}{2}$	$>$	$\frac{1}{6}$
$32 \times 0$	$<$	$1 \times 32$
1kg	$>$	500g

**SECTION C; State TRUE or False for the following statements. (5 marks)**

- 3 hundreds + 9 tens + 2 ones = 329. FALSE
- A leaf weighs about 2kg. FALSE
- A cube has 6 faces. TRUE
- A fortnight has 2 days. FALSE
- An angle has two rays with the same end point. TRUE

**SECTION D: Work out the answers of the following questions (10 marks)**

	QUESTION	WORKING	ANSWER
1.	$\begin{array}{r} 294 \\ + 438 \\ \hline \end{array}$		732
2.	Maria had 702 bean seedlings. She planted 389 on Monday afternoon. How many seedlings were not yet planted?		313
3.	Complete the pattern: 78, 76, 74, _____, _____		72 , 70

4.	There are 8 clowns. Each clown has 2 hats. How many hats are there in all?	$8 \times 2 =$	16
5.	 <p>The pencil is how many centimeters?</p>		4cm
6.	What is the time shown on the clock? 		Quarter to 6 5 : 45
7.	Arrange the volume in ascending order. 700ml, 3L , 250ml , 10L , 1000ml		250ml, 700ml, 1000ml, 3L, 10L
8.	Calculate the Area of the rectangle. 	L X W $5m \times 3m =$	Area = 15m
9.	 <p>a. How much will you pay for the 4 things?</p> <p>b. How much change will you get from \$10.00 if you buy only chicken nuggets?</p>	$\begin{array}{r} \$2.00 \\ \$1.85 \\ + \$2.75 \\ \hline \$8.75 \end{array}$  $\begin{array}{r} \$10.00 \\ - \$8.75 \end{array}$	<p>a. \$15.35</p> <p>b. \$1.25</p>

1076 NADI SANGAM SCHOOL  
WEEKLY HOME STUDY PACKAGE #22

REVIEW TEST(Solution)

SUBJECT : English

YEAR/ LEVEL : 3

Marks : 20

Name : \_\_\_\_\_

**Section A COMPREHENSION**

(5 marks)

Read the passage given below and then answer the questions that follow Choose the best answer.

**Going to the movies**

My class is going to the movies on a field trip next week. We have to get permission slips signed before we go. We also need to ask our parents if they will drive to the movie theatre. We are going to see a movie that tells the story from a book we read. We love it when movies are made from books. It is fun to compare the movie to the book. I usually like the book better.

We get to the movies early so that we can buy popcorn. Some of us buy candy and slushes too. We all enjoy watching the movie. When we return to school, we talk about things that were in the movie and in the book. The movie and book are similar. We all agree that we like the book better though. Books let you picture the characters anyway you want to picture them.

Circle the letter of the **best** answer to each question.

1. What do the students need to do before going to the movie?
  - A. Buy popcorn
  - B. Get permission slips signed by their teachers.
  - C. Get permission slips signed by their parents.**
  - D. Buy candy.
  
2. What is fun to compare ?
  - A. Movies and the popcorn.
  - B. Popcorn and the candies.
  - C. Candies and the book.
  - D. The book and the movies.**
  
3. What do the students like better ?
  - A. Popcorn
  - B. Movie
  - C. Book**
  - D. Slushes
  
4. Why do the students arrive early at the theatre ?
  - A. To get good seats
  - B. Visit the washroom.
  - C. Buy popcorn.**
  - D. Buy the tickets.

5. What do books let you do ?
- A. See the characters in the movie
  - B. Picture the characters as you want**
  - C. Hear the characters speak in the sound systems.
  - D. Live on the hill

**Section B (6 Marks)**






Complete the table with the correct form of comparing adjectives. The first one is done for you.

1. sharp	sharper	the sharpest
2. slow	<b><u>slower</u></b>	<b><u>the slowest</u></b>
3. big	<b><u>bigger</u></b>	<b><u>the biggest</u></b>
4. <b><u>sweet</u></b>	sweeter	<b><u>the sweetest</u></b>
5. <b><u>cold</u></b>	<b><u>colder</u></b>	the coldest
6. <b><u>dark</u></b>	<b><u>darker</u></b>	the darkest

**SECTION C Confusing Pairs**

(5 Marks)

Underline the best answer.

1. The (**bird**/bed) is flying. 
2. We sleep on the (bird/**bed**). 
3. I have two (**eyes**/ices). 
4. We plant (**flowers**/flours) in the garden. 
5. The (son/**sun**) is shining brightly. 

**Section D Phonics**

(4marks)

Make words with the same beginning sound

'th'	the	there
'gr'	grow	green
'kn'	knife	know
'sw'	sweet	sweep

1076 NADI SANGAM SCHOOL  
WEEKLY HOME STUDY PACKAGE #22(Solution)

REVIEW TEST

SUBJECT : Elementary Science

YEAR/ LEVEL : 3

Marks : 20

Name : \_\_\_\_\_

**Section A**

**Multiple Choice**

**(5 marks)**

Circle the letter of the correct answer

1. Ferns grow in \_\_\_\_\_ and moist places.  
**A. shady**                      B. Dry                      C. Hot
  
2. Plants take in carbon dioxide and give out \_\_\_\_\_.  
A. hydrogen                      **B. oxygen**                      C. sugar
  
3. Frogs have webbed feet which helps them to \_\_\_\_\_.  
A. run                      B. eat                      **C. swim**
  
4. Air is a \_\_\_\_\_.  
**A. gas**                      B solid                      C. liquid
  
5. Which type of force is applied when you are turning the door-knob?  
A. Push                      **B. Twist**                      C. Pull

**Section B**

**True or False**

**(5 marks)**

Write True or False beside each statement.

1. The planets in the solar system orbit the sun.                      True
2. Force can make an object stop moving.                      True
3. The earth has one moon.                      True
4. We measure rainfall with a wind vane.                      False
5. A cloud contains tiny water droplets.                      True

**Section C**

**Fill in the blanks**

**(5 marks)**

Use the words from the box to fill in the blank spaces.

Melt	solar	protect	eight	non-flowering
------	-------	---------	-------	---------------

2. A fern is a **non flowering** plant.
3. A spider has **eight** legs.
4. Applying heat to ice will cause it to **melt**.
5. The sun provides the energy in the form of **solar** power.

**Section D**

**Short Answers**

**(5 marks)**

1. Name 2 types of forces  
a). Pull force    b). Push force
  
2. List 2 types of energy that are used in Fiji in order to provide electricity.  
a). Solar Energy                      b). Hydro Energy

3. Name 2 types of clouds.

- a). Stratus
- b). Cirrus

4. Which instrument is used to find the wind direction?

Wind Vane

5. List the types of forces being used in the following scenarios

- a. opening the water bottle.      **Twist Force**
- b. raising the flag.                **Pull Force**
- c. kicking a ball.                    **Push Force**

**1076 NADI SANGAM SCHOOL**  
**WEEKLY HOME STUDY PACKAGE #22**

**SUBJECT: HEALTHY LIVING** **YEAR/ LEVEL: 3**  
**REVIEW TEST** **MARKS: 20**

**SECTION A** **MULTIPLE CHOICE** **5 MARKS**

1. We have \_\_\_\_ sense organs.  
A. 4  
B. 6  
C. **5**
  
2. Brush your teeth after every \_\_\_\_\_.  
A. Hour  
B. Day  
C. **Meal**
  
3. Ask for \_\_\_\_\_ if you have done something wrong.  
A. **Forgiveness**  
B. Mercy  
C. Gifts
  
4. If you are lost in a town then take help from a  
A. Stranger  
B. **Policeman**  
C. Shopkeeper
  
5. Always swim in \_\_\_\_\_ waters.  
A. Deep  
B. **Shallow**  
C. Flooded

**SECTION B** **TRUE AND FALSE** **5 MARKS**

1. Do not swim in flooded waters. **TRUE**
2. Wear bright coloured clothes while walking at night. **TRUE**
3. Practice and maintain good personal hygiene. **TRUE**
4. Doing physical activities does not help reduce fat. **FALSE**
5. An example of a symptom of food poisoning is nausea. **TRUE**

**SECTION C** **FILLERS** **5 MARKS**

Cover	water	germs	dust pan
Measles			

1. **Cover** food to stop the household pests from sitting on it.
2. **Measles** is an example of an air borne disease.
3. Typhoid is an example of a **water** borne disease.
4. Mosquitoes carry **germs** and makes us sick.
5. Collect all dirt in a **dustpan** and put it in the bin.



**SECTION D****SHORT ANSWERS****5 MARKS**

1. Give two ways by which you can help to keep your school clean.?  
Pick up rubbish and clean up where needed.  
Do the classroom duties according to class duty roster.
2. How can you help prevent air borne diseases?  
By covering your mouth when sneezing or coughing.  
By using face masks.
3. What is trachoma?  
Roughening of the inner surface of the eyelids due to infection.
4. Name a sickness caused by drinking dirty water?  
Typhoid  
Diarrhea

1076 NADI SANGAM SCHOOL  
WEEKLY HOME STUDY PACKAGE #22 SOLUTION

SUBJECT: SOCIAL STUDIES  
REVIEW TEST

YEAR/ LEVEL: 3  
MARKS: 20

SECTION A                      MULTIPLE CHOICE                      (5 MARKS)

1. A family is a group of people that
  - A. **Stays together**
  - B. Stays in different houses.
  - C. Stays in the same town.
  
2. Muslim people follow the Islam culture and they pray in
  - A. Temple
  - B. **Mosque**
  - C. Church.
  
3. My personal belongings are my
  - A. Mums car
  - B. Dads money
  - C. **My toothbrush, toys and clothes**
  
4. In a family tree diagram the sign = means
  - A. Descendant of
  - B. **Married to**
  - C. Siblings of
  
5. An example of an Indian artefact is
  - A. Iri
  - B. Tanoa
  - C. **Thali**

SECTION B                      TRUE AND FALSE                      (5 MARKS)

1. We should help each other in cleaning our house and compound. **TRUE**
2. A school is a place for learning. **TRUE**
3. Wear clean uniform to school. **TRUE**
4. Tins and broken bottles should be buried. **TRUE**
5. A budget is the plan of spending your income. **TRUE**

SECTION C                      SHORT ANSWERS                      ( 5 MARKS)

1. When drawing a family tree triangle is used to denote the **males.**
  
2. What is the role of father?  
**He is the head of the family so he has to earn money and provide for his family.**
  
3. What is the traditional dress for Indian women?  
**The traditional dress for Indian women is sari.**

4. Hindus worship place is called a **temple**.
5. Write down three ways in which your family disposes rubbish.  
**Burying**  
**Garbage trucks**  
**Reuse /recycling.**

SECTION D

DRAW AND COLOUR

5 MARKS

1. 2 Fijian artefacts



tanoa

2. Fijian fan (Iri)



3. My school



4. 2 proper ways of disposing rubbish.



**SECTION A**

**वचन (PLURALS)**

(5 MARKS)

एक वचन- बहुवचन

1. किताब- किताबें
2. लड़का- लड़के
3. चूहा- चूहे
4. गाना- गाने
5. केला- केले

किताबें	केले	लड़के	गाने	चूहे
---------	------	-------	------	------

**SECTION B**

**समान अर्थ (SAME MEANING)**

(5 MARKS)

1. सूरज- सूर्य
2. हवा- पवन
3. जल- पानी
4. पुस्तक- किताब
5. पाठशाला- स्कूल

किताब	पवन	पानी	सूर्य	स्कूल
-------	-----	------	-------	-------

**SECTION C**

**GRAMMAR**

(5 MARKS)

सही जवाब को लिखो ।

1. पानी बहुत ( ठंडा / ठंडी ) है ।
2. मेरी बहन आ ( रही / रहा ) है ।
3. गाय दूध ( देता / देती ) है ।
4. सरस ( दौड़ता / दौड़ती ) है ।
5. शाला ( पढ़ती / पढ़ता ) है ।

**SECTION D**

**विलोम शब्द (OPPOSITES)**

(5 MARKS)

1. हँसना- रोना
2. आकाश- धरती
3. नकली- असली
4. गरीब- धनी
5. गया- आया

रोना	धरती	धनी	आया	असली
------	------	-----	-----	------