

STRAND	WRITING AND SHAPING
SUB STRAND	Language features and rules.
CONTENT LEARNING OUTCOME:	Demonstrate appropriate conventions of writing to communicate information.

LESSON NOTES**OPPOSITE WORDS**

- Word that expresses a meaning opposed to the meaning of another word, in which case the two words are antonyms of each other.

Examples

Day – Night


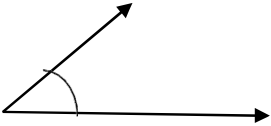
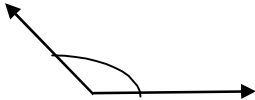

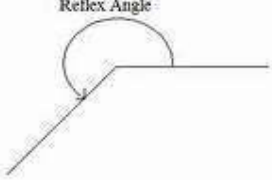
ACTIVITY

1. Above - _____
2. Absence- _____
3. Backward- _____
4. Worst- _____
5. Calm- _____
6. Floor- _____
7. Complicated- _____
8. Departure- _____
9. Exciting - _____
10. Failure- _____
11. Enemy - _____
12. Evening - _____
13. Stale- _____
14. Cheap- _____
15. Slim- _____

STRAND	GEOMETRY
SUB STRAND	Shapes
CONTENT LEARNING OUTCOME:	Name different kinds of lines, line segments, rays, perpendicular and parallel lines with their properties.

LESSON NOTES

Geometry- is the study of shapes.

Types of angles	Symbol
<p>RIGHT ANGLE</p> <p>A right angle is made when the two rays are perpendicular to each other. The right angle measures 90° (90 degrees). It is signified by the symbol</p>	
<p>ACUTE ANGLE</p> <p>The angle is less than a right angle (less than 90° :)</p>	
<p>OBTUSE ANGLE</p> <p>Bigger than one right angle but less than two right angles. More than 90°: but less than 180°.</p>	
<p>STRAIGHT ANGLE</p> <p>Made up of two right angles. Add up to 180°:</p>	
<p>REFLEX ANGLE</p> <p>More than two right angles but less than three right angles. Measures more than 180°: but less than 270°.</p>	<p>Reflex Angle</p> 

Activity

1. Answer the following questions.

- This angle is formed when two rays are drawn perpendicular to each other. _____
- This angle is more than 180: but less than 270: . _____
- A _____ angle adds up to 180.
- This angle is more than one right angle but less than two right angles. _____.
- A _____ angle is less than 270: _____

2. Draw the following types of angle.

Right angle	Obtuse angle	Acute angle	Reflex angle	Straight line angle

2036 Penang Sangam Primary School
Year 5
Healthy Living
Worksheet 20 (Revisional Activities)

Section A: Multiple Choice

Circle the best answer of your choice

1. There are _____ stages in a child's development.
a. 2 b. 4 c. 3 d. 7
2. At adolescence stage the child is trying to get an _____.
a. injection b. insect c. elephant d. identity
3. Growth _____ is when children actually grow a bit faster
a. spurt b. genes c. patterns d. syndrome
4. Everyday our body takes in air, _____ and _____.
a. meat juice b. cabbage coke c. food tang d. liquid food
5. Puberty is the start of the period called _____.
a. middle childhood b. adolescence c. adulthood d. baby
6. The _____ filters liquid waste from our body.
a. kidney b. pancreas c. heart d. liver
7. Our _____ also filters the blood but its main work is to remove toxins or drugs from the blood stream.
a. lungs b. intestine c. pores d. liver
8. Lots of water will help to _____ the formation of salts in the body.
a. change b. increase c. dilute d. decrease

Section B: Short Answer Questions

1. List at least two types of health support services that we have here in Rakiraki?
2. What are some problems faced by the people in your area in making use of these health services?
3. What is a hurricane?

4. Before a hurricane what are some safety measures that you will take?

5. What are some safety measures that you will take after a hurricane?

6. Why is family relationship important?

7. Write two ways in which we can send messages quickly?

8. Write down two diseases caused by germs?

9. What is the function of the molars teeth?

10. Write one way of how we can take good care of our skin?

Section C: Matching

1. Body building:

a. strong disagreement

2. diarrhoea

b. reuse things already being used

3. Recycle

c. fish

d. conflict

d. frequent toilet visitation

३. राजा जनक माता _____ के पिता थे ।
क. लक्ष्मी
ख. सरस्वती
ग. दुर्गा
घ. सीता
४. श्रीराम के जन्म दिन को किस नाम से जाना जाता है?
क. दीपावली
ख. जन्माष्टमी
ग. होली
घ. राम नवमी
५. श्री राम को _____ वर्षों का वनवास हुआ था ।
क. चौदह
ख. बारह
ग. तेरह
घ. ग्यारह
६. रावन के कितने सिर थे ?
क. एक
ख. तीन
ग. चार
घ. दस
७. श्री कृष्ण का उपदेश किस ग्रंथ में पाया जाता है ?
क. गीता
ख. पुराण
ग. रामायण
घ. चालीसा
८. _____ श्री कृष्ण के भाई थे ।
क. बलराम
ख. सुदामा
ग. अर्जुन
घ. मीरा
९. हिन्दू धर्म मानने वाले लोग _____ में पूजा करते हैं ।
क. गुरुद्वारा
ख. चर्च
ग. मंदिर
घ. मस्जिद
१०. वाल्मीकि ने किस ग्रंथ की रचना की थी ?
क. महापुराण
ख. रामायण
ग. गीता
घ. गुरुग्रंथ

2036 Penang Sangam Primary School
Year 5
Social Studies
Worksheet 20 (Revisional Activities)

Multiple Choice

1. A community is a group of _____ who live together in the same location and have something in common like race, religion and occupation.
a. horses b. cows c. people d. cats
2. A school is a community that has many _____ groups
a. youth b. social c. parental d. household
3. Social groups can be classified as _____ and _____.
a. abnormal normal b. single married c. big small d. informal formal
4. The first social group that we belong to is our _____.
a. family b. man's club c. women's club d. grog group
5. Fiji has a number of _____ organizations which raise money every year to help people who are unfortunate.
a. school b. class c. charitable d. organized

True or False

1. A charitable organization raises money _____.
2. Children also benefit from these organizations _____.
3. Everyone can be assisted by these organizations _____.
4. A government organization is a permanent organization only _____.
5. NGO is the short form of Non-governmental organization _____.

Fill in the blanks

money	voluntarily	organization	people	raise	number	unfortunate
-------	-------------	--------------	--------	-------	--------	-------------

A charitable _____ is set up to provide help and raise _____ for those in need in our communities. People help and give money _____ to these organizations to meet the needs of _____ who need help. Fiji has a _____ of charitable organizations which _____ money every year to help people who are _____.

Short Answer Questions

1. Name one government organization here in Fiji.
2. Give one non-governmental organizations.
3. What does NGO stands for?
4. Do the supermarkets in Fiji belong to the government?
5. Give one type of work the NGO's do.
6. What is Fiji known for in the South Pacific?
7. Definition of mother tongue.
8. Write down some races you can find in Fiji.
9. Who is Lutunasobasoba?
10. What kind of houses the early Fijians lived in?

2036 PENANG SANGAM PRIMARY SCHOOL
WORKSHEET 20
YEAR 5
VOSA VAKAVITI

STRAND	NA YAQONA
SUB STRAND	NA KENA VAKAYAGATAKI
OUTCOME	NA BIBI NI YAQONA

Lesson Notes

Ni caka e dua na soqo vakaiTaukei, ena sega ni yali kina na yaqona. Na yaqona e vakaraitaka na bibi ni soqo kei na noda veidokai. Ni caka tiko e dua na soqo se veivosaki vakavanua, se bose se soqo ni marau, e na kunei ga kina na yaqona.

E liu e dau caka ga na gunu yaqona ena gauna ni soqo vakavanua se soqo vakaturaga. Edaidai, sa caka ga na gunu yaqona ena gauna ga e rawa kina. E caka tub eka ga me ivakamatau ni soqo. Eliu era sega ni dau gunu yaqonana yalewa ka ra sega tale ga ni dau gunuva na cauravou. E kena ibalebale ga ni sa vakaturaga na yaqona. E sega tale ga ni dau gunuvi vakasivia na yaqona. Ia, kecaka oya, e sa na vakavuna me kani na yagodra ka drakadrka na vu ni bekebeka ni matadra o ira na dau gunu yaqona vakasivia. Oqo gona sa na qai tukuni kina na bole nei Ra Dovu, “Cerumi au, au cerumi iko.”

Matai ni wasewase

1. Vakamacalataka mada eso na gauna e dau vakayagataki kina na yaqona?
2. Na gauna e liu e cei soti era dau gunu yaqona?
3. Na gauna e dai era se vakatabui tu ga na cauravou kei na gone yalewa na gunu yaqona?
4. Na cava na i balebale ni dua e tukuna e “kalawaci ga na kau”?
5. Na cava nai bole nei Ra Dovu?

2036 PENANG SANGAM PRIMARY SCHOOL
YEAR 5
ELEMENTARY SCIENCE
WORKSHEET –20

STRAND	EARTH AND BEYOND
SUB STRAND	Soil
CONTENT LEARNING OUTCOME:	Identify different soil conservation practices.

LESSON NOTES

Soil Conservation

Home Methods

- **Plant a rain garden** –A rain garden is a shallow depression in your lawn or yard which will collect rain waterwashing over water-resistant surfaces. It prevents soil erosion and gives you an opportunity to grow wetland plants.
- **Use a rain barrel** - You can use a rain barrel underneath a downspout to collect water that runs off of your roof.The water collected can be used for your lawn and garden.

How can you help take care of our soil?

1. Start composting. This puts nutrients back into the soil and makes it healthier.
2. Buy organic fruits and vegetables from farmers who minimize their use of fertilizers, herbicides and pesticides on the soil.
3. Make an organic garden in your backyard and grow your own food.
4. Make sure you keep the soil healthy by not pouring leftover or used chemicals or oils on it.
5. Help your parents do yard work by pulling up weeds. This reduces the need to use harmful chemicals on the plants.

ACTIVITIES

1. Write down two home methods of soil conservation.

2. Write down two ways that can help to take care of our soil.
